



# YADURISE

## Yaduvanshi Renowned Intellectual Search Exam

Mock Test - (2019-20)

Time :- 1:30 Hours

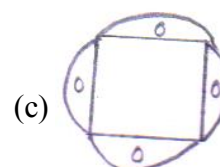
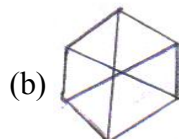
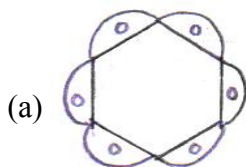
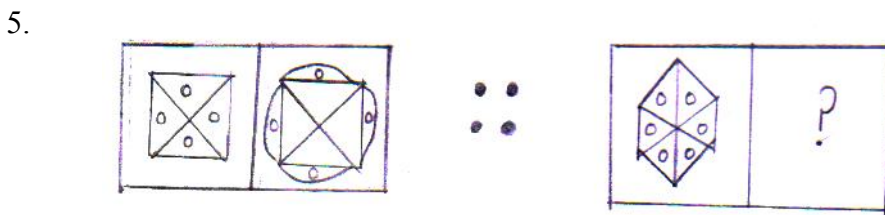
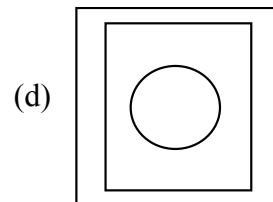
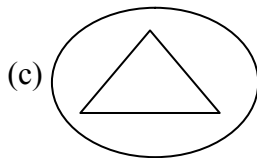
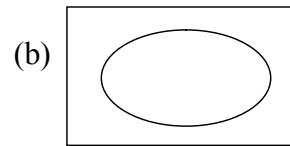
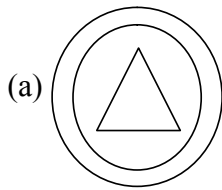
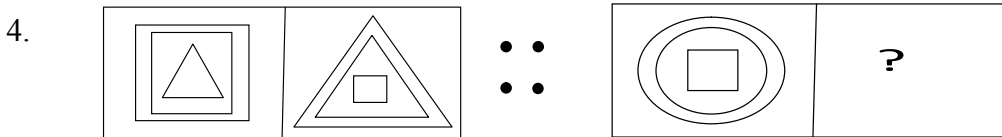
Class-5th

MM-70

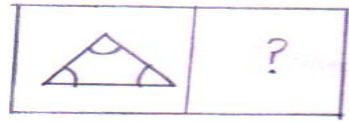

Mental Ability Section

Tick ( ✓ ) the correct answer.

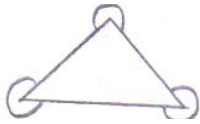
1. In a class number of boys are twice the number of girls. If number of girls are 20. How many boys are there in the class ?  
 (a) 35 (b) 40 (c) 37 (d) 20
2. If each packet can hold 10 socks. Find number of packets need to pack 100 socks ?  
 (a) 15 (b) 40 (c) 30 (d) 10
3. Today is monday. After two days a day will come . What will be the day after three days of that day.  
 (a) Sunday (b) Monday (c) Tuesday (d) Friday



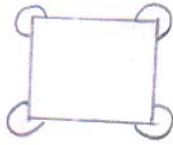
6.



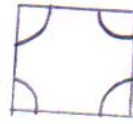
(a)



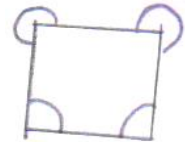
(b)



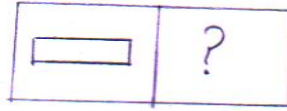
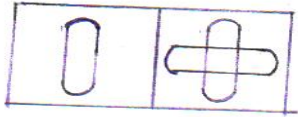
(c)



(d)



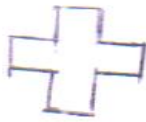
7.




(a)



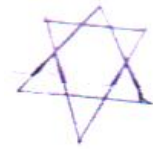
(b)



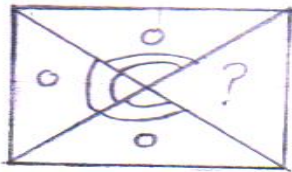
(c)



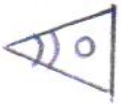
(d)



8.



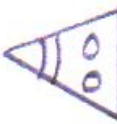
(a)



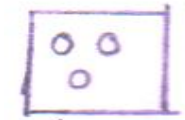
(b)



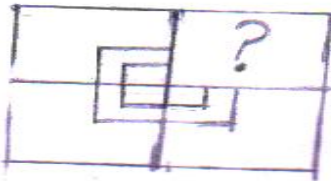
(c)



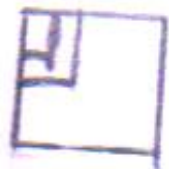
(d)



9.



(a)



(b)



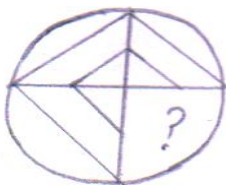
(c)



(d)



10.



(a)



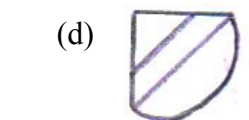
(b)



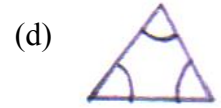
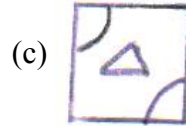
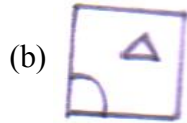
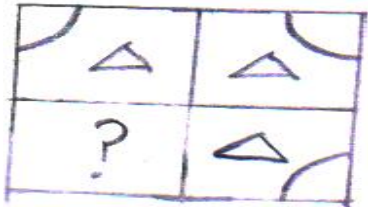
(c)



(d)

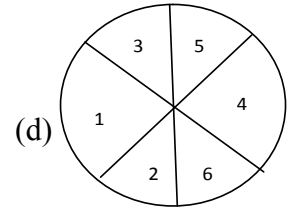
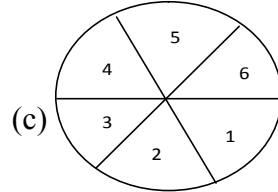
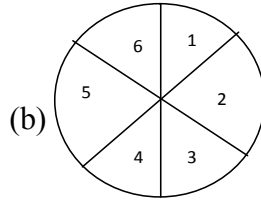
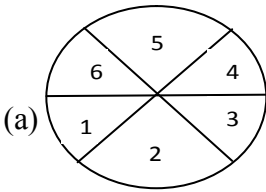


11.

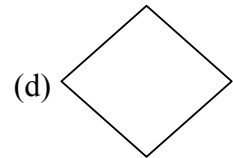
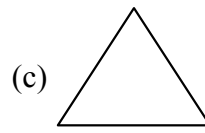
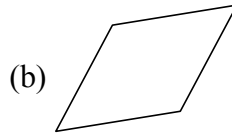
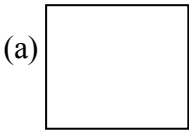


Tick ( ✓ ) odd one out

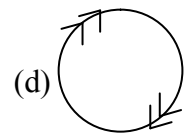
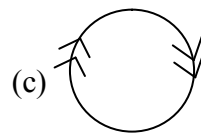
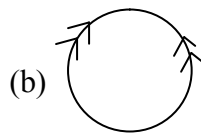
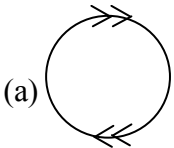
12.



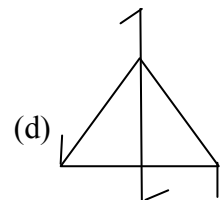
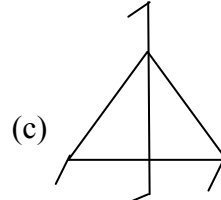
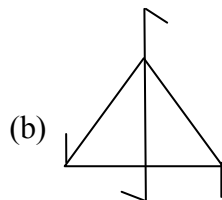
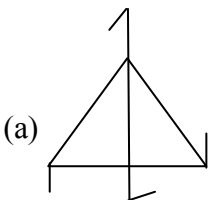
13.



14.



15.



Tick ( ✓ ) the correct codes from the following passage -

16.

B A D

M A N

(a) 4 1 2

1 14 3

(b) 2 1 4

13 1 14

(c) 5 6

8 9 11

(d) 6 7 8

13 2 15

17.

D O

A G A I N

(a) 4 3

2 1 4 8

(b) 9 7

1 3 5 7

(c) 3 7

6 9 11 4 3

(d) 4 15

1 7 1 9 14

18. 

H	E	R	T
---	---	---	---

  
 (a) 

9	7	3	4
---	---	---	---

 (b) 

8	5	18	20
---	---	----	----

  
 (c) 

8	6	11	14
---	---	----	----

 (d) 

8	1	4	3
---	---	---	---

19. 

T	E	S	T
---	---	---	---

  
 (a) 

20	5	19	20
----	---	----	----

 (b) 

19	5	18	6
----	---	----	---

  
 (c) 

4	9	11	10
---	---	----	----

 (d) 

3	6	7	8
---	---	---	---

20. 

R	E	A	D
T	E	S	T

 is coded as 

!	#	%	+
*	#	\$	*

D	E	A	R
---	---	---	---

 → 

--	--	--	--

  
 (a) 

!	#	#	+
---	---	---	---

 (b) 

+	!	+	#
---	---	---	---

 (c) 

+	#	%	!
---	---	---	---

 (d) 

*	*	!	+
---	---	---	---

**English Section**

21. A word that is used to relate a noun or pronoun to other words is called \_\_\_\_\_  
 (a) noun (b) pronoun (c) preposition (d) adverb
22. Which word is proper noun in this sentence ?  
 My brother lives in Mumbai.  
 (a) My (b) brother (c) lives (d) Mumbai
23. When a noun refers more than one things is called \_\_\_\_\_  
 (a) singular (b) plural (c) common (d) none of these

**Fill in the blanks with suitable modals :-**

24. \_\_\_\_\_ I have a piece of bread please ?  
 (a) May (b) Will (c) Could not (d) None of these
25. I \_\_\_\_\_ like to have coffee.  
 (a) will (b) should (c) would (d) can

**Fill in the blanks with correct prepositions -**

26. The cow is standing \_\_\_\_\_ two trees.  
 (a) between (b) among (c) on (d) above
27. Neena walked \_\_\_\_\_ the temple.  
 (a) to (b) at (c) on (d) under
28. Word that takes the place on noun :-  
 (a) pronoun (b) noun (c) adjective (d) adverb
29. How many kinds of adjective are there ?  
 (a) two (b) three (c) four (d) none of these
30. What is the superlative degree of "Bad" ?  
 (a) worst (b) worse (c) better (d) best
31. When we compare two things , we use \_\_\_\_\_ degree.  
 (a) positive (b) comparative (c) superlative (d) none of these
32. "Oh! I lost my book." The sentence is :-  
 (a) Imperative (b) Declarative (c) Assertive (d) Exclamatory

33. "Do not swim." The subject is :-  
(a) Do (b) not (c) swim (d) none of these

**Fill in the blanks by using correct conjunctions :-**

34. You will not be allowed to enter \_\_\_\_\_ you have the tickets.  
(a) so (b) unless (c) but (d) and
35. You are not well \_\_\_\_\_ do not go to office today.  
(a) but (b) so (c) and (d) because

**Mathematics Section**

36. The distance around a circle is called -  
(a) Arc (b) Radius (c) Circumference (d) Boundary
37. There is only one \_\_\_\_\_ in a circle.  
(a) Radius (b) Centre (c) Diameter (d) Arc
38. Any part of a circle is called -  
(a) Arc (b) Centre (c) Chord (d) Radius
39. All radii of a circle are \_\_\_\_\_ .  
(a) Different (b) Equal (c) segment (d) None
40. The longest chord of a circle -  
(a) Radius (b) Chord (c) diameter (d) centre
41. The area enclosed by the circumference is called \_\_\_\_\_ of the circle.  
(a) Exterior (b) Interior (c) Outside (d) Radius
42. How many radii we can draw in a circle ?  
(a) One (b) Two (c) Infinite (d) Four
43. A circle is a set of \_\_\_\_\_ .  
(a) Radius (b) Diameter (c) Points (d) None of these
44. If the radius of a circle is 2.5 cm , then what is the diameter of the radius-  
(a) 4 cm (b) 5 cm (c) 6 cm (d) 5.5 cm
45. A line segment joining any two points on the circle is called -  
(a) Diameter (b) Chord (c) Radius (d) Centre
46. A line segment which passes through the centre and has its end points on the circle is called -  
(a) Diameter (b) Chord (c) Radius (d) None of these
47. If the diameter of a circle is 10 cm, then what is the radius of the circle -  
(a) 6 cm (b) 5 cm (c) 4 cm (d) 4.5 cm
48. If the radii of two circles are 5 cm and 4.5 cm , then which circle is greater -  
(a) With radius 4.5 cm (b) with radius 5 cm (c) both a and b (d) None of these
49. Diameter is double of \_\_\_\_\_ .  
(a) Arc (b) Chord (c) Radius (d) Circumference
50. How many diameter in a circle \_\_\_\_\_ .  
(a) 2 (b) 3 (c) 4 (d) Infinite
51. A/ An ..... fraction can be changed into a mixed fraction.  
(a) Improper (b) proper (c) like (d) unlike

52. The cost of one pencil is Rs.  $2\frac{1}{2}$ . Find the cost of 8 such pencils.  
 (a) Rs. 12 (b) Rs. 20 (c) Rs. 18 (d) Rs. 22
53. The reciprocal of  $\frac{9}{15} =$  \_\_\_\_\_  
 (a)  $\frac{9}{15}$  (b)  $\frac{7}{15}$  (c)  $\frac{15}{9}$  (d) none of these
54. The fifth multiple of 13 is = \_\_\_\_\_  
 (a) 78 (b) 52 (c) 39 (d) 65
55. What is the HCF of 12 and 42.  
 (a) 6 (b) 9 (c) 12 (d) 42

### **E.V.S. Section**

56. Silkworm is domesticated to get \_\_\_\_\_  
 (a) Wool (b) Silk (c) Cotton (d) Plastic
57. Wild animals live in -  
 (a) Our house (b) Farm (c) Forest (d) Shed
58. The roar of a lion can be heard from \_\_\_\_\_ kms away.  
 (a) 3 (b) 8 (c) 10 (d) 13
59. Cows, goats, sheep are domesticated for -  
 (a) egg (b) milk (c) clothes (d) leather
60. First domesticated animals are -  
 (a) Dogs (b) Cows (c) Goats (d) All
61. Which animals are domesticated for fur ?  
 (a) Sheep (b) Camel (c) Mountain Goat (d) All
62. India domesticated a large number of-  
 (a) Hippopotamus (b) Rhinoceros (c) Camels (d) Sheep
63. Animals are also used for .  
 (a) Fight (b) Medical treatment (c) Entertainment (d) None of these
64. Animals are hunted for their  
 (a) Horn (b) Skin (c) Bones (d) All
65. Which animals are naturally dangerous, unpredictable and ferocious ?  
 (a) Pet animals (b) Wild animals (c) domestic animals (d) none of these
66. Which animal have chin ?  
 (a) Dog (b) Elephant (c) Cow (d) Cat
67. Which animals are used for ploughing fields ?  
 (a) Horse (b) Donkeys (c) Bullocks (d) All
68. Where are animals kept for the people to watch and enjoy ?  
 (a) Zoo (b) House (c) Farm (d) Forest
69. Early man hunted animals for his -  
 (a) Milk (b) Food (c) Fight (d) Entertainment
70. Animals are our -  
 (a) Enemies (b) Brothers (c) Friends (d) None of these