

2nd iRAO 18

International Reasoning & Aptitude Olympiad







In association with:
SOCIETY OF SCIENCE EDUCATION
 New Delhi - India
 www.silverzone.org

CLASS : 3 SAMPLE QUESTIONS

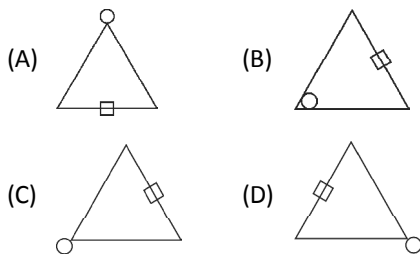
The Actual Question Paper Contains 50 Questions. The Duration of the Test Paper is 60 Minutes.

1. Identify the relationship between the pair of figures given on either side of :: and then find the missing figure.



- (A)  (B) 
 (C)  (D) 
 (E) None of these

2. Find the odd one out.



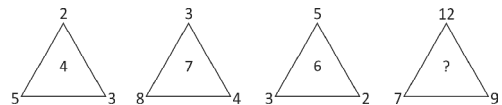
- (E) None of these

3. Which one of the following pairs of letters will replace the question mark (?) in the letter series given below?



- (A) KR (B) GT
 (C) HQ (D) GQ
 (E) None of these

4. Which number will replace the question mark (?) in the number pattern given below?

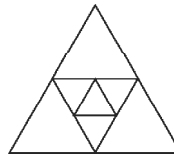


- (A) 11 (B) 10
 (C) 9 (D) 12
 (E) 8

5. In a row of 13 boys, I am fifth from right. My position from left is:

- (A) ninth (B) eleventh
 (C) seventh (D) fifth
 (E) None of these

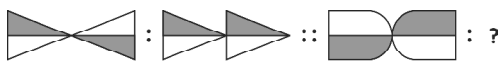
6. How many triangles are there in the figure given below?



- (A) 7 (B) 8
 (C) 9 (D) 11
 (E) None of these

7. One morning after sunrise, I was standing facing an electric pole. The shadow of the pole fell exactly to my left side. Which direction was I facing?
 (A) East (B) West
 (C) North (D) South
 (E) None of these

8. Identify the relationship between the pair of figures on either side of :: and then find the missing figure.



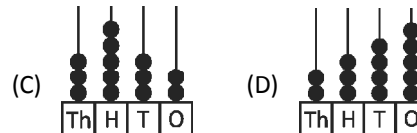
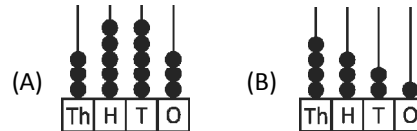
- (A) (B)
 (C) (D)
 (E) None of these

9. Divya is making this calendar for the bulletin board. Which day of the week should be on 27th February 20XX?

February 20XX						
Sun	Mon	Tue	Wed	Thu	Fri	Sat
			1	2	3	4
5	6	7	8	9	10	11

- (A) Sunday (B) Monday
 (C) Saturday (D) Wednesday
 (E) None of these

10. Which one of the following abacuses shows the number more than 4000?



- (E) None of these

ANSWERS

1. (C) 2. (B) 3. (D) 4. (B) 5. (A) 6. (C) 7. (C) 8. (D) 9. (B) 10. (B)