



Presented by
SILVERZONE
 FOUNDATION
 Organized by
COMPUTER LITERACY
FOUNDATION
 New Delhi, India
 Promoting Computer Science Education
 www.silverzone.org

CLASS 4th SYLLABUS & SAMPLE QUESTIONS

- ❖ Introducing Computer Programming Languages ❖ Computer's Peripherals
- ❖ Categories of Computers ❖ Primary Memory ❖ Secondary Memory ❖ Knowledge about data access mode ❖ Storage Capacity ❖ Access Time ❖ Introducing System Software
- ❖ Introducing Application Software ❖ Fun with logo ❖ Drawing in paintbrush
- ❖ Fundamentals of Windows ❖ Getting Start with MS-word ❖ Mental ability Reasoning

The Actual Question Paper Contains 40 Questions. The Duration of the Test Paper is 60 Minutes.

1. **Which statement is NOT correct about Paint Brush?**

- (A) Paint brush is used to make designs.
- (B) BMP is the default extension for paint brush files.
- (C) Paint brush is NOT a standard part of Windows Operating System.
- (D) 'Untitled-paint' indicates that paint brush file has not been saved.
- (E) None of these

2. **BASIC, COBOL, LOGO, FORTRAN, etc. are some examples of _____.**

- (A) Low-level languages
- (B) High-level Languages
- (C) Machine language
- (D) Assembly Languages
- (E) None of these

3. **These computers will have the capability of thinking on their own like a man with the help of Artificial Intelligence (AI). The 21st century will see better, faster, smaller and smarter computers."**

The above statement is correct about:

- (A) Second Generation Computers.
- (B) Third Generation Computers.
- (C) Fourth Generation Computers.

- (D) Fifth generation Computer.
- (E) None of these

4. **Steve works in Paintbrush. He wants to rotate his graphics at any angle. The following steps are given: Which one of the following sequences will help him to perform the desired task?**

- (i) Select your object using the Select tool
- (ii) Indicate option, whether horizontal or vertical
- (iii) Click on Flip/Rotate command on the Image menu
- (iv) The Picture will flip accordingly
- (A) (i) -> (ii) -> (iii) -> (iv)
- (B) (i) -> (iii) -> (ii) -> (iv)
- (C) (iii) -> (ii) -> (i) -> (iv)
- (D) (iv) -> (iii) -> (ii) -> (i)
- (E) None of these

5. **Which of the following is/are correct statement(s) about Speaker?**

- 1. Speaker is used to convert the electronic signal into audio signal.
- 2. Speaker is used to convert the audio signal into electronic signal.
- (A) Only 1 (B) Only 2
- (C) Both 1 and 2 (D) Both are False
- (E) None of these

6. Fill in the blanks:
- Secondary memory devices are ___ as compare to Primary memory (per MB)
 - Secondary memory stores ___ amount of data as compare to Primary memory.
 - Secondary memories are _____ as compared to Primary memories.
- (A) Expensive, Less, Fast
 (B) Cheaper, Large, Slower
 (C) Cheaper, Small, Slower
 (D) Expensive, Large, Fast
 (E) None of these


7. Match the following:
- | | |
|----------|---------------------------|
| 1. RAM | i. Rewritable memory chip |
| 2. ROM | ii. Written only once |
| 3. PROM | iii. Volatile |
| 4. EPROM | iv. Non-volatile |
- (A) 1, iii; 2, iv; 3, ii; 4, i
 (B) 1, iv; 2, iii; 3, ii; 4, i
 (C) 1, i; 2, ii; 3, iii; 4, iv
 (D) 1, ii; 2, i; 3, iv; 4, iii
 (E) 1, iii; 2, ii; 3, iii; 4, i


8. Which of following is a correct descending order according to their storage capacity?
- (A) CD>DVD>HDD (B) HDD>CD>DVD
 (C) HDD>DVD>CD (D) DVD>HDD>CD
 (E) None of these


9. In MS Word, to select a sentence, click anywhere at the sentence by holding
- (A) Ctrl key (B) Shift Key
 (C) Home Key (D) End Key
 (E) None of these


10. After typing a letter or a report, you would like to have a paper output or hard copy for future use. Which of the following options is/ are correct to print in MS Word?
- (A) From File menu (print)
 (B) From Standard menu (print icon)
 (C) Press Ctrl + P
 (D) All of these
 (E) None of these


11. After working in any application, you save your file by giving file name plus a three letter extension. What is the file extension of paint file?
- (A) .pmb (B) .bmp
 (C) .pnt (D) .bpm
 (E) None of these

12. Find out which figure is different from other three.
- 
(A)



(B)


(C)



(D)
- (E) None of these

13. Which figure would fit in the question mark?
- 


:





:




:

?
- 
(A)


(B)


(C)


(D)
- (E) None of these



ANSWERS															
1.	C	2.	B	3.	D	4.	B	5.	A	6.	B	7.	A	8.	C
9.	A	10.	C	11.	B	12.	C	13.	A						