





1. Consider the following figure:



Which one of the following is/are the input device(s)?

- (a) Both (i) and (ii)
- (b) (i), (ii) and (iii)
- (c) (i), (ii) and (iv)
- (d) All of above

2. Match the following:

A	B
1. 	i. Straight line
2. 	ii. Polygon
3. 	iii. Eraser
4. 	iv. Ellipse

3. What +, -, *, and are called?

- (a) Logical operator
- (b) Sequential operator
- (c) Arithmetic operator

- (d) All of these
4. Given below are the statements about mouse and icon. Select the correct statement.
1. If you want to see the contents of a particular disk, place the pointer on it and single click it.
 2. For opening any files/disk, we must double click on it.
 3. Icon represent only Files not Folders.
- (a) 1 and 3 (c) 1 and 2
(b) Only 2 (d) All of these
5. In which one of the following generations of computers the technology of integrated circuits was introduced?
- (a) 1st Generation (b) IInd Generation
(c) IIIrd Generation (d) IVth Generation
6. In MS-Paint, Right click the mouse on color box to:
- (a) Change the file name
(b) Change the background color
(c) Change the foreground color
(d) Right click has no use in MS-Paint
7. In Windows, the first screen we see, after booting up the computer, Is called:
- (a) Background Screen
(b) Desktop
(c) Wallpaper
(d) Home Page
8. Michael feeds the data and instructions into the computer with the help of certain devices. What kind of device he uses for this action?
- (a) Input device
(b) Output device
(c) Controller device

- (d) Regulating device
9. What is the full form of CPU?
- (a) Control Processing Unit
 - (b) Central Power Unit
 - (c) Central Processing Unit
 - (d) Command Processing Unit
10. To get \$ sign, you should press:
- (a) Shift +3
 - (b) Shift+4
 - (c) Shift+5
 - (d) Shift+6