

PRACTICE SET 1

A Whole Content Based Test for Class 7th Reasoning Asiad

1. Country is related to President in the same way as school is related to

A Teacher B Peon
C Principal D Students

2. In the following question, find the one letter that will complete the word in front of the circle and begin the word after the circle. The same letter must fit into both sets.

TIM(?) GO, HAL(?) ARTH

A O B E
C A D F

3. In the following question, find the two words, one from each group, that together make a new, meaningful word. The word from the first group always comes first.

1	2	3	P	Q	R
HIGH	DARK	TEA	DOOR	CAR	HORSE

A 2P B 3R C 1Q D 2R

4. Choose one letter that can be moved from the word on the left to the word on the right, making two new words

RANGE	OWE
-------	-----

A N B A C E D R

5. Pick up the correct option that makes the given series complete.

A AAA AAAAAA
A AA B AAAAA
C AAAA D AAAAAAA

6. If $T = 52$, $Q = 13$, $J = 9$, $A = 3$ and $U = 31$, then find the value of following expression. $A \cdot J + T \mid Q = ?$

A C B Q
C U D T

7. 79 is related to 63 in the same way as 21 is related to

A 2 B 3
C 1 D 0

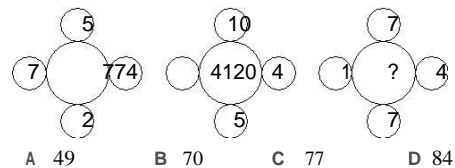
8. Sudiksha wants to go to school. She starts from her home which is in the West and comes to the crossing. The road to the left, ends in a park, straight ahead is the theater. In which direction is the school?

A South B East
C West D North

9. If cow is called lion, lion is called cat, cat is called rat and rat is called donkey, then who is the king of jungle?

A Cow B Donkey C Lion D Cat

10. Find the missing term which replaces the question mark.



11. Pointing to Yana, Daksh says, "I am the son of the only son of her grandfather." How is Daksh related to Yana?

A Sister B Brother C Son D Cousin

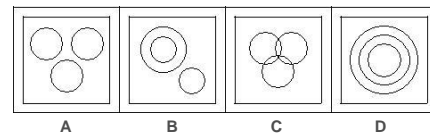
Direction (Q. No. 12) Study the given information carefully and answer the question that follows.

- P, Q, R, S, T and U are sitting around a circle facing towards the centre.
- T is sitting on the immediate left of R but is not the neighbour of S or U.
- Q is sitting opposite to T.
- S is sitting between P and Q.

12. Who is sitting between S and U?

A T B Q
C P D R

13. Which of the following diagrams best depicts the relationship among Pencil, chair and stationery?



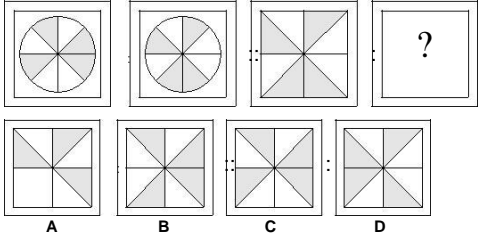
14. If '+' means '|', '|' means '·' and '·' means '+', then $20 \cdot 10 \mid 6 + 2 = ?$

A 60 B 10
C 0 D 50

15. Which of the following is odd one out?

A India
B Sri Lanka C Asia
D England

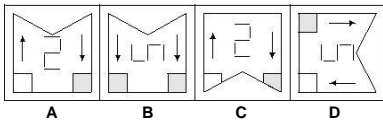
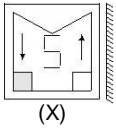
16. Find the correct figure which replaces the question mark.



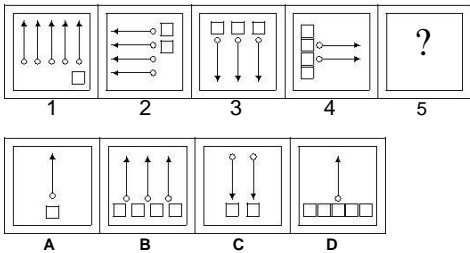
17. Find the odd one out.

A JOPK B
AOPB C
TOPU D
TOPS

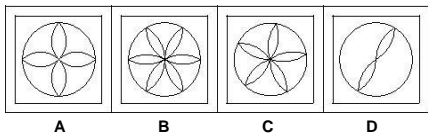
18. Select a figure from the options which forms the correct mirror image of fig. (X).



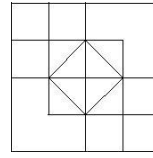
19. Select a figure from amongst the options which will continue the series established by the given problem figures?



20. In this question, there are four figures as given in options (a), (b), (c) and (d). Out of these four figures, three are similar in a certain way. Choose the figure which is different from the rest.

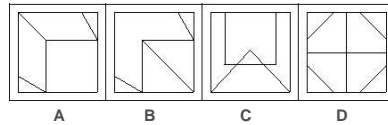
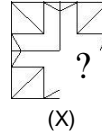


21. How many squares are there in the given figure?

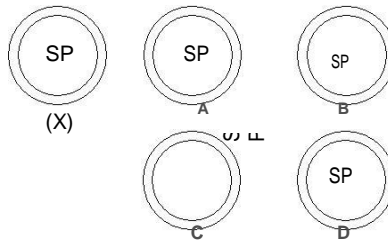


A 17 B 16 C 15 D 19

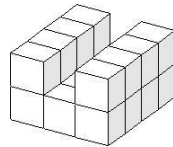
22. Find the figure from the options which completes the fig. (X).



23. Choose the correct water image of the given figure (X).

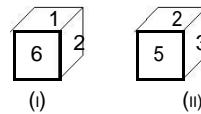


24. Count the number of cubes in the given figure.



A 25 B 30 C 20 D 10

25. Two positions of a dice has been shown here. What digit will be just opposite to 2?



A 1 B 6 C 3 D 4