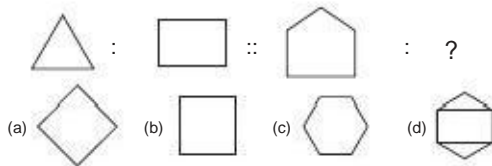


Practice Set 1

A Whole Content Based Test for Class 3rd Reasoning Asiad

1. Identify the one that does not belong to the group.
 (a) Friday (b) Monday (c) Wednesday (d) Today

2. Figures in the first pair are related to each other in a certain way. Find the missing figure in the second pair in the same way as the first pair.




3. Which letter from the given alternatives will complete the first word and start the second word.



- (a) S (b) T (c) E (d) R
4. If Black is called Pink, Pink is called Yellow, Yellow is called Red, Red is called Blue, then what is the colour of Sunflower?
 (a) Red (b) Blue (c) Black (d) Pink
5. Four friends took part in a maths olympiad. Tipsy scored more than Mark, but less than Ginny. Ginny does not scored the highest marks. Rax scored more than Tipsy. Who among them scored the least?
 (a) Ginny (b) Rax (c) Tipsy (d) Mark

Direction (Q. Nos. 6-7) Observe the positions of teddies and answer the questions that follow.

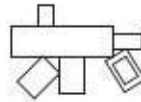


6. If teddy E is removed from the sequence, then which teddy is third to the left of G?
 (a) D (b) C (c) B (d) A
7. If one more teddy I is added after H in the sequence, then how many teddies are there after F?
 (a) 5 (b) 2 (c) 4 (d) 3
8. Which number will come in place of question mark?



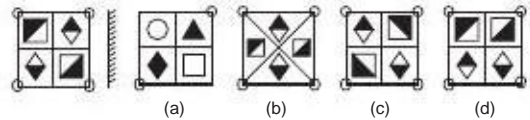
- (a) 35 (b) 29 (c) 32 (d) 40

9. Count the number of rectangles in the figure shown below

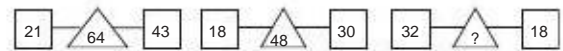


- (a) 8 (b) 7
 (c) 6 (d) 10

10. Find the mirror image of the figure shown below.



11. Which number from the given options will replace the question mark?

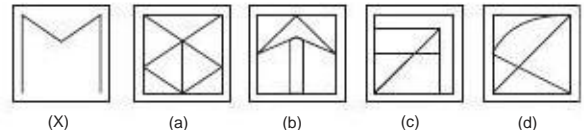


- (a) 48 (b) 45 (c) 40 (d) 50


12. A pattern is drawn on a piece of paper. Which figure from the given alternatives will complete the given pattern?



13. In which figure the given shape (X) is hidden?

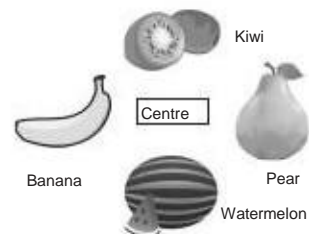


14. Which word from the given alternatives cannot be formed using the letters of the given word?



- (a) NICE (b) CHIN (c) EACH (d) THREAD

15. In the shop of a fruits vendor. Fruits are kept as shown below



Which fruit is kept in the North direction?

- (a) Banana (b) Kiwi (c) Pear (d) Pear