

Who is the fastest?

- (A) Raman (B) Rakesh
(C) Sunil (D) Both A and B

SAMPLE QUESTIONS SCIENCE

Q1. Which one of the following plants needs least amount of water to grow?



- (A) Mango tree (B) Banyan tree
(C) Cactus (D) None of the above

Q2. Which one of the following activities can be the reason for the wastage of water?



- (A) Activity-1 (B) Activity-2
(C) Activity-3 (D) Activity-4

Q3. Vikas collects polythene bags and burns it. What harm does he cause to the environment through this activity?



- (A) His activity causes pollution
- (B) His activity adds the poisonous gas into the atmosphere
- (C) Both A and B
- (D) None of the above

Q4. What kind of family does the following figure represent?



- (A) Small family
- (B) Nuclear family
- (C) Joint family
- (D) None of the above

Q5. If P stands for park then how many parks are there in the following map of a locality?



- (A) 1
- (B) 2
- (C) 3
- (D) 4

SAMPLE QUESTIONS MENTAL ABILITY

Q1. There are 100 children in a village. Half of them reads in 3rd Class and 25 children read in 4th class. Rest of them reads in 1st and 5th class. How many students read in 1st and 5th class?

- (A) 50 children
- (B) 40 children
- (C) 25 children
- (D) None of the above

Q2. In a 4 members family, R is the wife of P while L is the son of P and R. D is the grandson of P. How is D related to L?


- (A) D is the son of L
- (B) L is the Son of D
- (C) D is the grandson of L
- (D) None of the above

**Q3. After how many numbers does 0 come in the following series?
(Count from right)**

4 0 8 2 3

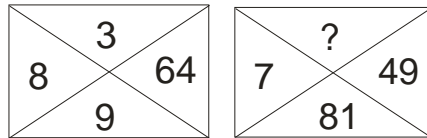
- (A) 5 (B) 2
(C) 4 (D) 3

Q4. Observe the following pattern and write the missing number:



- (A) 4 (B) 5
(C) 7 (D) 8

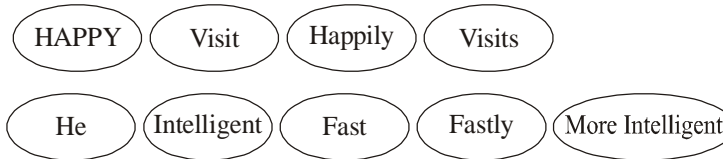
Q5. Observe the following pattern and write the missing number:



- (A) 7 (B) 8
(C) 9 (D) None of the above

SAMPLE QUESTIONS ENGLISH

Q1. Fill in the blanks with the suitable words given in the circle.



- (i) **Rajiv is an _____ student. He has scored good marks.**
(ii) **She _____ the zoo more often.**

Q5. Make questions from the following figure:



Question 1: ?

Answer 1: Children are playing in the garden.

Question 2: ?

Answer 2 : An old man is sitting on the bench.

Question3:

Answer3: Children play in the evening.

- (A) i- Where are children playing? ii-Whom is sitting on the bench? iii-When do children play?
- (B) i- Why are children playing? ii-Who is sitting on the bench? iii-When do children play?
- (C) i- Where are children playing? ii-Who is sitting on the bench? iii-When do children play?
- (D) None of the above

SAMPLE QUESTIONS GENERAL KNOWLEDGE

Q1. Which one of the following animals is called the ship of the desert?

- (A) Camel
- (B) OX
- (C) Elephant
- (D) None of the above

Q2. Which one of the following animals is called farmer's friend?

- (A) Rat
- (B) Rabbit
- (C) Earthworm
- (D) None of the above

Q3. Ramesh is suffering from deficiency of vitamin A. He is likely to suffer from which one of the following diseases?

- (A) Ricket
- (B) Skin Problem
- (C) Lung infection
- (D) Night blindness

Q4. Name the Indian born American astronaut who died in the crash of spacecraft?

- (A) Kalpna Chawla (B) Sunita Williams
(C) Rakesh Sharma (D) None of the above

Q5. Which Indian cricket player is called the Master Blaster?

- (A) Virendra Sehwag (B) Sachin Tendulkar
(C) Yuvraj Singh (D) None of the above

Class 3 Math Answers

1. Ans A 2. Ans C 3. Ans D 4. Ans C 5. Ans C

Class 3 Science Answers

1. Ans C 2. Ans C 3. Ans C 4. Ans C 5. Ans D

Class 3 Mental Ability Answers

1. Ans A 2. Ans A 3. Ans D 4. Ans D 5. Ans C

Class 3 English Answer

1. Ans C 2. Ans A 3. Ans C 4. Ans A 5. Ans C

Class 3 General Knowledge Answer

1. Ans A 2. Ans C 3. Ans D 4. Ans A 5. Ans B