

Class 1

SAMPLE QUESTIONS MATHEMATICS

Q1. Look at the following:

Rajesh has the following balls:



Raman has the following balls:



Who has more balls?

- (A) Rajesh
- (B) Raman
- (C) Both have equal No. of balls
- (D) None of the above

Q2. What will come at 4 to replace the question mark?

(1)



(2)



(3)




(4) ?


(A)



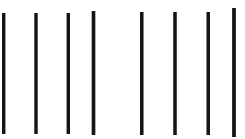
(B)



(C)



(D)

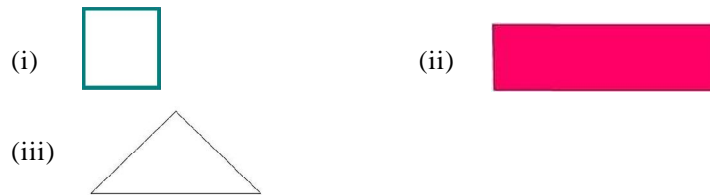


Q3. Add the following figures:



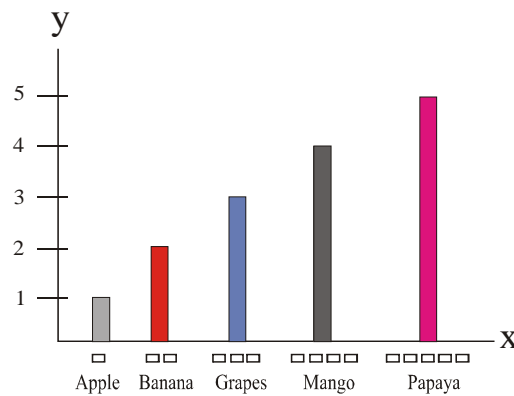
- (A) 15
- (B) 16
- (C) 17
- (D) 18

Q4. Identify the shapes.



- (A) (i) Square (ii) Rectangle (iii) Triangle
- (B) (i) Rectangle (ii) Square (iii) Triangle
- (C) (i) Square (ii) Rectangle (iii) Angle
- (D) None of the above

5. Which fruit is maximum in the following graph:



- (A) Apple
- (C) Mango

- (B) Banana
- (D) Papaya

SAMPLE QUESTIONS SCIENCE

Q1. Identify the healthy food from the following:

Column A



Column B



- A. Food given in column A
- C. Both A and B

- B. Food given in column B
- D. None of the above

Q2. Match the following:

1.



2.



3.



A



B







C



- A. 1-C, 2-A, 3-A
- C. Both A and B

- B. 1-B, 2-A, 3-C
- D. None of the above

Q3. Who is the youngest member in the family?

 Father	39 years
 Mother	36 years
 Brother	12 years
 Sister	8 years

- (A) Brother (B) Sister
(C) Father (D) Mother

Q4. How are the following clothes helpful to us?



Sweater



Shocks



Hat

- (A) They keep us warm. (B) They keep us cool.
(C) They protect us from rain. (D) None of the above

Q5. Identify the following festival:



- (A) Christmas (B) Holi
(C) Diwali (D) None of the above

Q5. The cost of one toffee is Re 1. Raman purchases toffees for Rs 20. How much money does he need to purchase 7 more toffees?

- (A) Rs. 9 (B) Rs. 7
(C) Rs. 8 (D) None of the above

SAMPLE QUESTIONS ENGLISH

Q1. Write the following naming words:

1.



2.



3.



- (A) 1- Bus, 2- Joker, 3-Train (B) 1- Bus, 2- Train, 3-Joker
(C) 1- Train, 2- Joker, 3-Bus (D) 1- None of the above

Q2. Fill in the blanks using adjectives:



A _____ (i) animal lived in the forest. One day he saw a

_____ (ii) animal. He had _____ (iii) fur on his body.

- (A) i- small, ii- many, iii-white (B) i- small, ii- big, iii-no
(C) i- small, ii- big, iii-white (D) 1- None of the above

Q3. Look at the following picture and complete the sentence with action words.

(i)



The doctor is _____ the patient.



The cobbler is _____ shoes.



The maid is _____ clothes.

- (A) i- treat, ii- mending, iii-washing
(B) i- treating, ii- mending, iii-washing
(C) i- small, ii- big, iii-white
(D) None of the above

Q4. Fill in the blanks with suitable preposition.



People are sitting _____ the garden.



The books are _____ the table.

- (A) i- in, ii- on
(B) i- at, ii- on
(C) i- in, ii- at
(D) 1- None of the above

Q5. Arrange the words to make a meaningful sentence.

Read you in class first

- (A) You read first in class. (B) You read in first class.
(C) Both A and B (D) None of the above

SAMPLE QUESTIONS GENERAL KNOWLEDGE

Q1. Who is the Prime Minister of India ?

- (A) Dr. Manmohan Singh (B) Sonia Gandhi
(C) Rahul Gandhi (D) None of the above

Q2. Who is the President of India?

- (A) Dr. Manmohan singh (B) Sonia Gandhi
(C) Pranab Mukherjee (D) None of the above

Q3. Where is the capital of India?

- (A) Mumbai (B) Chennai
(C) Kolkata (D) Delhi

Q4. When do we celebrate the Independence Day of India?

- (A) 26th January (B) 15th August
(C) 2nd October (D) None of the above

Q5. Who is the captain of Indian Cricket Team?

- (A) Mahendra Singh Dhoni (B) Sachin Tendulkar
(C) Virat Kohli (D) None of the above

Class 1 Math Answer

1. Ans B 2. Ans B 3. Ans C 4. Ans A 5. Ans D

Class 1 Science Answer

1. Ans A 2. Ans B 3. Ans B 4. Ans A 5. Ans B

Class 1 Science Answer

1. Ans C 2. An B 3. Ans C 4. Ans D 5. Ans B

Class 1 Science Answer

1. Ans A 2. Ans C 3. Ans B 4. Ans A 5. Ans B

Class 1 General Knowledge Answer

1. Ans A 2. Ans C 3. Ans D 4. Ans B 5. Ans A