



INTSO EDUCATION

GENERAL KNOWLEDGE TALENT SEARCH OLYMPIAD(GTSSO) 2015 - 2016

STAGE - 1



TIME : 60 min.





CLASS : III

Max. Marks : 50

Instructions:

- ⇒ Fill the OMR sheet completely and carefully.
- ⇒ Each question carries one mark and has only one correct answer. No negative marks
- ⇒ The question paper contains 50 questions to be answered in 60 minutes.

1. Which is the highest peak in the World ? []
1) Mt. Everest 2) Mt. K2 3) Makalu 4) Annapurna
2. Where is the famous Dal Lake present ? []
1) Himachal Pradesh 2) Jammu and Kashmir 3) Madhya Pradesh 4) Odisha
3. What is the capital of Thailand ? []
1) Jakarta 2) Manila 3) Bangkok 4) Belgrad
4. Suez canal connects []
1) Mediterranean and Red Sea 2) Baltic and Caspian Sea
3) Mediterranean and North Sea 4) Red Sea and Caspian Sea
5. Which is the largest fresh water lake in India ? []
1) Wular Lake 2) Kolleru Lake 3) Loktak Lake 4) Dal Lake
6. Which is the farthest planet from the Sun ? []
1) Mercury 2) Jupiter 3) Neptune 4) Venus
7. Identify the adjacent picture. []
1) Anand Bhavan
2) Hawa Mahal
3) Falaknuma Palace
4) Gol Gumbaz

8. Which is the longest river in India ? []
1) Godavari 2) Krishna 3) Indus 4) Ganga
9. Bhopal is the capital of []
1) Madhya Pradesh 2) Andhra Pradesh 3) Odisha 4) Goa
10. Very large continuous stretches of land on the Earth's surface are called []
1) Oceans 2) Continents 3) Universe 4) Galaxy
11. Identify the following picture. []
1) Jama Masjid
2) Mecca Masjid
3) Gol Gumbaz
4) Qutab Minar


12. What is the longest mountain range on Earth ? []
 1) Ural mountains 2) Atlas Mountains 3) Himalayas 4) Andes
13. Identify the following picture. []
 1) Machu Picchu
 2) Christ the Redeemer
 3) Statue of Liberty
 4) Angor Wat
- 
14. Which planet named after the Roman God of Wars ? []
 1) Venus 2) Jupiter 3) Saturn 4) Mars
15. Identify the following picture. []
 1) Gateway of India
 2) India Gate
 3) Charminar
 4) Golconda Fort
- 
16. The Thar desert lies in the state of []
 1) Punjab 2) Rajasthan 3) Bihar 4) Maharashtra
17. Some of the states and their capitals are given below. Identify the incorrect set. []
 1) Mizoram–Aizwal 2) Nagaland–Kohima 3) Assom–Dispur 4) Sikkim–Agartala
18. Which is the largest Ocean ? []
 1) Pacific Ocean 2) Atlantic Ocean 3) Indian Ocean 4) Arctic Ocean
19. Which is the tallest animal on the land ? []
 1) Elephant 2) Cape Buffalo 3) Giraffe 4) Camel
20. Which is the largest museum in India ? []
 1) Amaravathi Museum, Amaravathi 2) Salarjung Museum, Hyderabad
 3) Indian Museum, Kolkata 4) Kutch Museum, Bhuj
21. Which was the first satellite launched by India ? []
 1) Aryabhata 2) Rohini 3) GSAT–16 4) Bhaskara
22. Identify the following picture. []
 1) Sun Temple
 2) Birla Temple
 3) Somnath Temple
 4) Meenakshi Temple
- 
23. Identify the following Picture. []
 1) Charminar
 2) Qutub Minar
 3) Burj Khalifa
 4) Gol Gumbaz
- 

24. Which is the smallest state in India ? []
 1) Sikkim 2) Assom 3) Goa 4) Manipur
25. Which of the following Indian state capital is known as 'Garden City'? []
 1) Chennai 2) Hyderabad 3) Bengaluru 4) Raipur
26. Which of the following oceans is in between Africa and Australia ? []
 1) Indian Ocean 2) Arctic Ocean
 3) South Atlantic Ocean 4) South Pacific Ocean
27. Which is the largest country (area) in the World ? []
 1) U.S.A. 2) Russia 3) China 4) Canada
28. Which is the highest road in India ? []
 1) Leh–Manali Highway 2) Delhi – Srinagar Highway
 3) Chennai–Kolkata 4) Gandhinagar–Kolkata
29. Among the following peaks in Himalayas, the highest peak entirely within india is []
 1) Kanchenjunga 2) Mt. k2 3) Nanda Devi 4) Dhaulagiri
30. Titan is the satellite of []
 1) Uranus 2) Saturn 3) Neptune 4) Jupiter
31. The Ukai dam is built across the river []
 1) Narmada 2) Tapti 3) Mahi 4) Son
32. Which is the longest National Highway in India ? []
 1) N.H - 5 2) N. H - 6 3) N. H - 7 4) N. H - 9
33. What is the capital of America ? []
 1) Washington D.C 2) New York 3) Wellington 4) Moscow
34. India is a part of this continent []
 1) Asia 2) Africa 3) Europe 4) North America
35. Which is the deepest fresh water lake in the world ? []
 1) Lake Vostok 2) Lake Malawi 3) Lake Baikal 4) Crater Lake
36. Which is the closest planet to the Sun ? []
 1) Jupiter 2) Mars 3) Mercury 4) Uranus
37. What is the distance between the Moon and the Earth ? []
 1) 2, 84, 400 kms 2) 3,84, 400 KM 3) 4, 84, 400 kms 4) 1, 84, 400 KM
38. The largest desert in entire Southern Hemisphere is []
 1) Australian 2) Kalahari 3) Petagonia 4) Atacama
39. The largest Epic in the world is []
 1) Odissy 2) Mahabharata 3) Illiad 4) Aeneid
40. Identify the following picture. []
 1) Grand Baykue
 2) Roman Colosseum
 3) Angor Wat
 4) Great Pyramid of Giza
41. What is the capital of France ? []
 1) London 2) Lisbon 3) Paris 4) Havana



42. Imaginary lines running north and south on the Globe are known as []
1) Latitudes 2) Longitudes
3) Polar lines 4) North to South equators.

43. Which Indian state has the longest coastline ? []
1) Andhra Pradesh 2) Maharashtra 3) Gujarat 4) Odisha

44. Which is the hottest and the brightest planet ? []
1) Mercury 2) Venus 3) Mars 4) Uranus

45. What do we call the bright 'Full Moon' day ? []
1) New Moon 2) Amavasya 3) Purnima 4) Crescent Moon

46. Identify the following picture. []

- 1) Amba Vilas Palace
- 2) Falaknuma Palace
- 3) Bangalore Palace
- 4) Rambagh Palace



47. Harare is the capital of []
1) Guinea 2) Zambia 3) Zimbabwe 4) Tunisia

48. Identify the following picture. []

- 1) Yellow Square
- 2) Red Square
- 3) Pink Square
- 4) White Square



49. What is the capital of Germany ? []
1) Munich 2) Hamburg 3) Berlin 4) Paris

50. Identify the following Picture. []

- 1) Christ the Redeemer
- 2) Sydney Opera House
- 3) Saint Peters Basilica
- 4) Falaknuma Palace

