



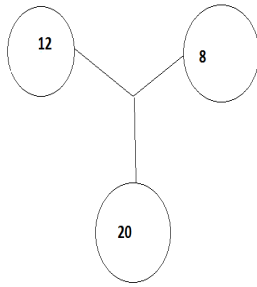
**National Commerce Olympiad 2012**  
**A True Test Of Your Genius**  
**National Commerce Olympiad Foundation**  
*An NGO For Research & Development Of Commerce Studies*

**Aptitude VI**

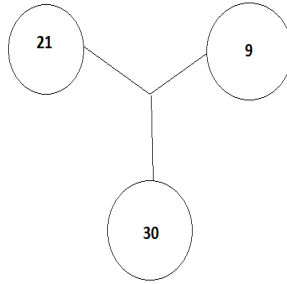
- Q1.** Complete the given series A, C, E, \_\_  
(a) B (b) D (c) G (d) F
- Q2.** Given the appropriate answer of the give question HOSPITAL is to PATIENT as SCHOOL is to  
(a) Teacher (b) Student (c) Classroom (d) Building
- Q3.** Find the odd one among the following  
(a) AC (b) PR (c) EG (d) ST
- Q4.** Find the odd one out  
(a) June (b) August (c) July (d) Sunday
- Q5.** Find the missing number in given series?  
1, 4, 9, ?, 25, 36  
(a) 10 (b) 12 (c) 14 (d) 16
- Q6.** Suppose If your face is towards North, then you walk straight, take a right turn, then again walk straight and take a right turn. Now tell in which direction your face is  
(a) East (b) West (c) North (d) South
- Q7.** Which is the number that comes next in the sequence?  
2, 7, 12, 17, ?  
(a) 18 (b) 20 (c) 22 (d) 24
- Q8.** Find the odd one out  
(a) (b) Banana (c) Mango (d) Spinach
- Q9.** If triangle has 4 side, Quadrilateral has 5 side then, Pentagon has?  
(a) 6 sides (b) 5 sides (c) 7 sides (d) 8 sides
- Q10.** Find the missing character in the given question.



**National Commerce Olympiad 2012**  
**A True Test Of Your Genius**  
**National Commerce Olympiad Foundation**  
*An NGO For Research & Development Of Commerce Studies*

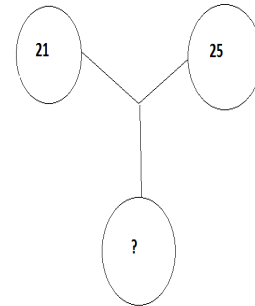


(a)44



(b)45

(c)46



(d)47

*Answer key*

1.(c) 2. (b) 3. (d) 4. (d) 5. (d)  
6.(d) 7. (c) 8. (d) 9. (a) 10. (c)

**Head Office**

H-108, 2nd Floor, New Asiatic Building, Connaught Place, New Delhi-110001  
Ph: 011-43694444 (30 lines), Email: [info@ncofindia.org](mailto:info@ncofindia.org), [www.ncofindia.org](http://www.ncofindia.org)



*National Commerce Olympiad 2012*  
**A True Test Of Your Genius**  
**National Commerce Olympiad Foundation**  
*An NGO For Research & Development Of Commerce Studies*

NCOF Sample questions 2012