



Organized by

SILVER ZONE
 FOUNDATION





 In association with:
COMPUTER LITERACY FOUNDATION
 New Delhi, India
 Promoting Computer Science Education
www.silverzone.org

CLASS 7th SYLLABUS & SAMPLE QUESTIONS

- ❖ Introducing Operating System (OS) ❖ Windows Explorer ❖ Types of Computer Languages ❖ Computer Networking and its Usage ❖ Internet ❖ Working with Microsoft Word
 ❖ Introducing Multimedia ❖ Mental ability Reasoning

The Actual Question Paper Contains 50 Questions. The Duration of the Test Paper is 60 Minutes.

- Which one of the following symbols is used for processing to make a flowchart of a program?

(A) 	(B) 
(C) 	(D) 

 (E) None of these
- While working with MS-Word, Which one of the following key combinations is used to remove formatting (Bold, Italic, Underline, etc) from selected text?

(A) Ctrl + Shift + Spacebar	(C) Ctrl + Shift + R
(B) Ctrl+Spacebar	(D) Ctrl + R
(E) None of these	
- In the URL <http://www.silverzone.org>, which part is the protocol name?

(A) http	(B) www
(C) .org	(D) silverzone
(E) None of these	
- _____ are very large in size and usually placed in very large cabinets.

(A) Mini Computers
(B) Micro Computers
(C) Mainframe Computers
(D) Laptops
(E) None of these
- A bar found on top of a window, contains the name of the file or application. In many graphical user interfaces, including the Macintosh and Microsoft Windows interfaces, you move (drag) a window by grabbing this bar. What is it called?

(A) Menu bar	(B) Status Bar
(C) Scroll bar	(D) Title bar
(E) None of these	
- Connecting different computers in an organized manner is called

(A) Internet	(B) Intranet
(C) Routing	(D) Networking
(E) None of these	
- Match the following:

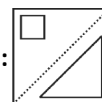
A	B
1. Assembly	i. Scientific calculation
2. FORTRAN	ii. Business oriented language
3. COBOL	iii. 2 nd Generation language
	iv. 1 st Generation language

(A) 1 → iii; 2 → i; 3 → ii
(B) 1 → iv; 2 → ii; 3 → i
(C) 1 → ii; 2 → iii; 3 → i
(D) 1 → i; 2 → ii; 3 → iii
(E) 1 → iv; 2 → iii; 3 → ii

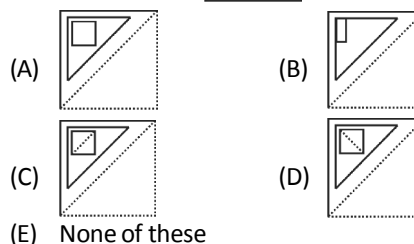
8. **What are Biometric Sensors ?**
 (A) Device used in hospitals for curing patients
 (B) Device used for the science practical in schools
 (C) A device used for the recognizing biological viruses
 (D) Used for security and access control management
 (E) None of these
9. **WINDOWS is a _____ Operating System.**
 (A) Non GUI based (B) Multi-User
 (C) Both (A) and (B) (D) Single user
 (E) None of these
10. **VSAT stands for :**
 (A) Very Small Architecture Technology
 (B) Variable Standards for Advance Telephony
 (C) Very Small Aperture Terminal
 (D) Very Small Aperture Texture
 (E) None of these
11. **The storage subsystem in a microcomputer consists mainly of _____ or _____ media with varying capacities.**
 (A) Memory or video
 (B) Magnetic or optical
 (C) Optical or memory
 (D) Video or magnetic
 (E) None of these
12. **Mail Merge feature of Ms-Word is mainly used for:**
 (A) Merging emails in the document
 (B) For receiving mails in the document file
 (C) Generating the same document to multiple addresses
 (D) Merging multiple MS-Word documents
 (E) None of these

13. **Consider the following two statements:-**
Statement A: Universal Serial Bus (USB) drive is a serial bus standard based interface.
Statement B: USB does not require any expansion card to connect any peripheral to the computer.
Which of the following is correct with respect to the above statements?
 (A) Statement A is correct.
 (B) Statement B is correct.
 (C) Statement A and B both are correct.
 (D) Neither statement A nor statement B is correct.
 (E) None of these

14. **Figure out, from amongst the four alternatives, as to how the pattern would appear when the transparent sheet is folded at the dotted line.**

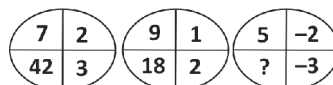


Question Figure :



(E) None of these

15. **Which number should come in place of question mark (?)**



- (A) 18 (B) 13
 (C) 30 (D) -30
 (E) None of these

ANSWERS

1. A 2. B 3. A 4. C 5. D 6. D 7. A 8. D
 9. B 10. C 11. B 12. B 13. C 14. A 15. C