



Organized by

SILVER ZONE
 FOUNDATION

In association with:

COMPUTER LITERACY FOUNDATION
 New Delhi, India

 Promoting Computer Science Education
www.silverzone.org

CLASS 5th SYLLABUS & SAMPLE QUESTIONS

❖ Categories of Computers ❖ An introduction to Windows ❖ Working With Ms-Word ❖ Networking ❖ Internet ❖ Introducing Multimedia ❖ Mental ability Reasoning

The Actual Question Paper Contains 50 Questions. The Duration of the Test Paper is 60 Minutes.

1. **The DPI is the measurement unit of quality of printers. What does DPI stands for:**
 - (A) Data Per Inch
 - (B) Dot Per Inch
 - (C) Data Processing Implementation
 - (D) All of these
 - (E) None of these
2. **Which one of the following is the feature of a digital computer?**
 - (A) Digital computer uses 0 and 1 digits to represent the signal
 - (B) Digital computer uses continuous signals in the form of waves
 - (C) Digital computer's accuracy is poor
 - (D) Digital computer operates by measuring rather than counting
 - (E) None of these
3. **The graphical system that manages what appears on the screen and provides graphics support for printers and other output devices is called _____.**
 - (A) DGI
 - (B) IGD
 - (C) GDI
 - (D) GUI
 - (E) None of these
4. **To see 'File Size' and 'Modified Date' of any File in a Folder, which is the appropriate view of that Folder?**
 - (A) View->List
 - (B) View->Icon
 - (C) View->Details
 - (D) View->Tiles
 - (E) None of these
5. **While working with MS-Word, Ctrl + P key combination is used to:**
 - (A) Open paragraph menu
 - (B) Open Page Property
 - (C) Open Print Dialog Box
 - (D) Open Print-Preview Dialog Box
 - (E) None of these
6. **The full form of GUI is -**
 - (A) Graphical User Interface
 - (B) Good Usable Interface
 - (C) Graphical User Internet
 - (D) Graphical Used Internet
 - (E) None of these
7. **While working with MS-Word, what is the shortcut key combination to increase the font size?**
 - (A) Ctrl+ Tab+ Enter
 - (B) Alt+ Shift+ Spacebar
 - (C) Shift+ Ctrl + >
 - (D) Shift+ Ctrl+ Up arrow
 - (E) None of these

8. Analog computers are used in engineering and _____ fields.

- (A) Teaching
- (B) Advertising
- (C) Painting
- (D) Scientific
- (E) None of these

9. Which of the following is the correct order of steps to insert a clip art in Word document?

- (1) Position the insertion point where the graphic will be inserted
 - (2) Click Insert
 - (3) Click on the ClipArt option
- (A) 2, 1, 3
 - (B) 1, 2, 3
 - (C) 2, 3, 1
 - (D) 1, 3, 2
 - (E) None of these

10. In which one of the following disciplines, multimedia is used for research processes?

- (A) Medicine
- (B) Biology
- (C) Engineering
- (D) All of these
- (E) None of these

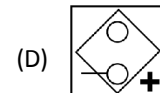
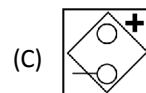
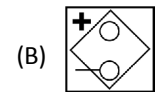
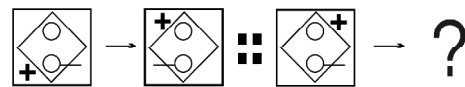
11. If LATE is coded as PEXI, then how will you code TRACE?

- (A) XVELI
- (B) XVEGI
- (C) SVFGI
- (D) XUEGH
- (E) None of these

12. ¶ is used to _____.

- (A) Create a new paragraph
- (B) Display or hide symbols for characters like spaces and tabs
- (C) Display or hide the title bar
- (D) Display or hide spelling and grammar errors
- (E) None of these

13. Complete the sequence given below, from options available.



- (E) None of these

14. How will be paper look like if folded at the dotted line?



- (E) None of these

ANSWERS

1. B 2. A 3. D 4. E 5. C 6. A 7. C 8. D
 9. B 10. D 11. B 12. B 13. D 14. C