

Sample Question Paper

SECTION-A

1. The _____ is a wonderful electronic machine that can perform various tasks and make our life easier.

(A) Typewriter



(B) Computer



(C) Generator



(D) None of these

2. Identify the common characteristic between man and the computer.

(A) Can draw and calculate

(B) Can get tired

(C) Can take decisions

(D) Can show emotions

3. Which one of the following is one of the most important features of computer?

(A) Speed

(B) Shape

(C) Size

(D) None of these

4. The keyboard of Steve is showing 'Num Lock ON', it means he can type numbers in computer. How will he switch it OFF?

(A) By pressing Shift Key

(B) By pressing Tab Key

(C) By pressing Num Lock Key

(D) By pressing Caps Lock Key

5. In keys having two characters, which of the following is used while typing characters printed at the top of the keys?

(A)



(B)



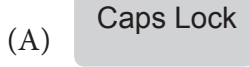
(C)



(D)



6. Which of the following keys when pressed once, all letters will be typed in capital letters?



7. The number of keys row which can be used to insert numbers and symbols is _____.

- (A) The top row of keys on the keyboard
- (B) The row below the symbols keys
- (C) The row below the function
- (D) The bottom row of the keyboard

8. The given set of keys are called the _____.



- (A) Function keys
- (B) Arrow keys
- (C) Special keys
- (D) Navigation keys

9. Which of the following is used to connect a computer to a power source?



10. Which one of the following is a logical operator?

- (A) +
- (B) -
- (C) *
- (D) >

11. CD is a very common item. Most of the students use it for various purposes. What is the full form of CD?

- (A) Cookies Dise
- (B) Circular Dise
- (C) Compact Dise
- (D) None of these





12. Computer has a device which supplies power to it even during power cuts. What is the name of this device?

- (A) UPS
- (B) CPU
- (C) Monitor
- (D) None of these





13. Computer in Cyber Cafes are used for _____.

- (A) Sending and receiving e-mails
- (B) Chatting with friends
- (C) Internet browsing
- (D) All of these

14. Which of following tool can be used to draw a star?


- (A) 
- (B) 
- (C) 
- (D) 

15. Match the following:

- | | |
|---|---------------------|
| <p>i. </p> | <p>A. Magnifier</p> |
| <p>ii. </p> | <p>B. Pencil</p> |
| <p>iii. </p> | <p>C. Brush</p> |
| <p>iv. </p> | <p>D. Eraser</p> |

- (A) A-iv, B-iii, C-i, D-ii
- (B) A-iii, B-iv, C-ii, D-i
- (C) A-ii, B-i, C-iii, D-iv
- (D) None of these

16. A rounded rectangle is which shape.

- (A) 
- (B) 
- (C) 
- (D) 

17. In Railways, computers are mainly used for _____.

- (A) Maintaining train movements
- (B) Watching movies
- (C) Preparing discharge slips
- (D) Making salary slips

18. Which of the following statements is true about a computer?

- (A) You can add large numbers on a computer
- (B) You can record phone numbers and addresses on a computer.
- (C) A computer cannot commit mistakes on its own.
- (D) All of these

19. Computers helps scientists mainly in _____.

- (A) Launching rockets and satellites
- (B) Making sketches
- (C) Making building layouts
- (D) None of these

20. Capt. Das, a pilot says that computer helps him to _____.

- (A) Watch movies on plane
- (B) Control and monitor the flight
- (C) Keeps traveller records
- (D) Send and receive mails

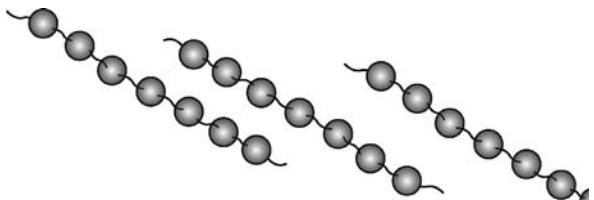
SECTION-B

21. The shaded face of the object  is a

- (A) Rectangle
- (B) Square
- (C) Triangle
- (D) Circle

22. Which of the following is the correct way to find the total number of beads ?

- (A) 7×3
- (B) $7 - 3$
- (C) $21 \div 3$
- (D) $21 \div 7$



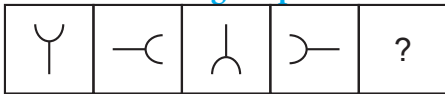
23. Which is heavier, a ball or a balloon of the same size ?

- (A) Ball
- (B) Balloon
- (C) none
- (D) can't say

24. Pick one which does not conform to the pattern.

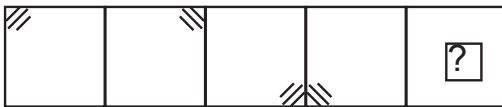
- (A) 
- (B) 
- (C) 
- (D) 


25. Find the missing shape.



- (A) 
- (B) 
- (C) 
- (D) 

26. Which is the next figure in the given pattern ?



- (A) 
- (B) 
- (C) 
- (D) 

27. Which of the picture does not show fourth ?

- (A) 
- (B) 
- (C) 
- (D) 

28. In the pyramid , how many triangle are there ?

- (A) 6
- (B) 5
- (C) 4
- (D) Can't say

12. Which number comes in the missing place in the given patterns.

1, 3, 5, 7, _____

- (A) 9
- (B) 11
- (C) 3
- (D) 5

30. This clock is 10 minutes fast. The correct time is _____.

- (A) 4:50
- (B) 4:55
- (C) 5:15
- (D) 5:50



Note: The actual Question Paper will translated in Hindi at the time of exam.

Darken your choice with HB Pencil																													
1	(A)	(B)	(C)	(D)	(E)	11	(A)	(B)	(C)	(D)	(E)	21	(A)	(B)	(C)	(D)	(E)												
2	(A)	(B)	(C)	(D)	(E)	12	(A)	(B)	(C)	(D)	(E)	22	(A)	(B)	(C)	(D)	(E)												
3	(A)	(B)	(C)	(D)	(E)	13	(A)	(B)	(C)	(D)	(E)	23	(A)	(B)	(C)	(D)	(E)												
4	(A)	(B)	(C)	(D)	(E)	14	(A)	(B)	(C)	(D)	(E)	24	(A)	(B)	(C)	(D)	(E)												
5	(A)	(B)	(C)	(D)	(E)	15	(A)	(B)	(C)	(D)	(E)	25	(A)	(B)	(C)	(D)	(E)												
6	(A)	(B)	(C)	(D)	(E)	16	(A)	(B)	(C)	(D)	(E)	26	(A)	(B)	(C)	(D)	(E)												
7	(A)	(B)	(C)	(D)	(E)	17	(A)	(B)	(C)	(D)	(E)	27	(A)	(B)	(C)	(D)	(E)												
8	(A)	(B)	(C)	(D)	(E)	18	(A)	(B)	(C)	(D)	(E)	28	(A)	(B)	(C)	(D)	(E)												
9	(A)	(B)	(C)	(D)	(E)	19	(A)	(B)	(C)	(D)	(E)	29	(A)	(B)	(C)	(D)	(E)												
10	(A)	(B)	(C)	(D)	(E)	20	(A)	(B)	(C)	(D)	(E)	30	(A)	(B)	(C)	(D)	(E)												