

Sample Question Paper


SECTION-A

1. Which one of the following is a machine?



(E) None of these

2. Which one is a light weight and compact computer.



(E) None of these

3. Which one of following devices helps you to listen to music using computer?



(E) None of these

4. The correct sequence to start a computer: (When Electric Switch is already ON)

- (A) CPU on → UPS on → Monitor on
- (B) UPS on → CPU on → Monitor On
- (C) Monitor On → CPU On → UPS On
- (D) Any of these
- (E) None of these

5. Given below is a picture. I identify this picture.

- (A) Monitor
- (B) CPU
- (C) Mouse
- (D) Keyboard
- (E) None of these



6. Jack wants to write his name on the computer. Which part of the computer helps him to write his name?

- (A) Monitor
- (B) CPU
- (C) Mouse
- (D) Keyboard
- (E) None of these

13. When you start to work on computer, which one of the following is use to click the start to open a program?

- (A) Scanner
- (B) Printer
- (C) Joystick
- (D) Mouse
- (E) None of these

8. What is used to type matters in the computer?



A



B



C



D

- (A) A
- (B) B
- (C) C
- (D) D
- (E) None of these

9. Match the following:



- 1. Mouse
- 2. CPU
- 3. UPS
- 4. Monitor



- A. Display device
- B. Power supply
- C. Input device
- D. Brain of computer

- (A) 1-C, 2-A, 3-D, 4-B
- (C) 1-D, 2-B, 3-C, 4-A
- (E) None of these

- (B) 1-C, 2-D, 3-B, 4-A
- (D) 1-A, 2-D, 3-B, 4-C

10. Identify UPS?

- (A) 
- (C) 
- (E) None of these

- (B) 
- (D) 

11. If you want to scan your photo, then which one of the following devices you can use to do it?

- (A) Keyboard
- (B) Printer
- (C) Scanner
- (D) All of these
- (E) None of these

12. What has keys you can press?

- (A) Monitor
- (B) CPU
- (C) Keyboard
- (D) Mouse
- (E) None of these

13.  This is called _____

- (A) Desktop
- (B) Start
- (C) Picture
- (D) All of these
- (E) None of these

14. Which one of the following make our work more easily, fast and accurate?

- (A) Computer
- (B) Tree
- (C) Animal
- (D) All of these
- (E) None of these

15. Which one of the following options is correct for shutting down the computer?

- (A) First click start button then click on shut down button
- (B) First click shut down then start button and finally OK
- (C) First click OK then shut down and finally start button
- (D) All of these
- (E) None of these

16. Which one of the following devices is optical device used for storage of huge volume of data?

(A) Hard disk



(B) DVD



(C)



(D) All of these

(E) None of these

17. Name the arrow shaped symbol moving on the screen.

(A) Pointer

(B) Icon

(C) Desktop

(D) Taskbar

(E) None of these

18. Identify the device that moves in all directions to control the movement of the pointer and most commonly used for playing games.

(A) Mouse

(B) Keyboard

(C) Monitor

(D) Joystick

(E) None of these

19. Given below two statements. Which one of the following is correct?

1. Computers are used in schools to teach the students.

2. Computers are not used in schools to teach the students.

(A) Statement 1

(B) Statement 2

(C) Both statement 1 and 2

(D) All of these

(E) None of these

20. What can a computer do?

(A) It works out the sum

(B) It helps to draw pictures



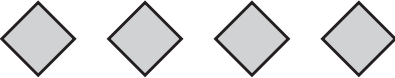

(C) It helps to play games

(D) All of these





(E) None of these

SECTION-B

21. Which row has the most shapes?

- (A) 
- (B) 
- (C) 
- (D) 
- (E) None of these

22. Which is the odd one out?

- (A) 
- (B) 
- (C) 
- (D) 
- (E) None of these

23. Which number sentence is incorrect ?

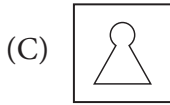
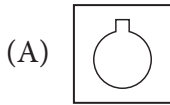
- (A) $3 + 6 = 10$
- (B) $2 + 8 = 10$
- (C) $1 + 9 = 10$
- (D) $4 + 6 = 10$
- (E) None of these

24. Salil has 4 pencils. He lends 2 pencils to Priyanka. How many does Salil has left ?

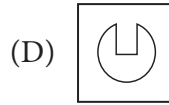
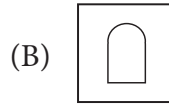


- (A) 0
- (B) 1
- (C) 2
- (D) 3
- (E) None of these

25. Which is odd one out ?



(E) None of these



26. Whose tall is the shortest ?




(E) None of these




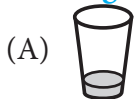
27. Stephanie has 6 balls. She gave half of them to her brother. How many does she have left ?

- (A) 1
(C) 3
(E) None of these


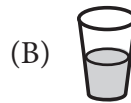
- (B) 2
(D) 4



28. Which glass has more orange juice ?

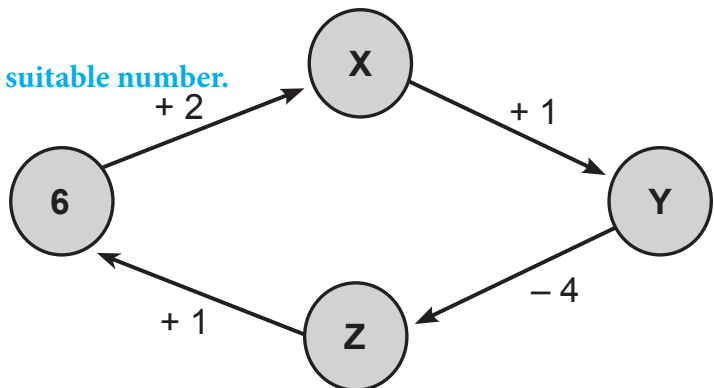







(E) None of these



29. Replace X, Y and Z by the suitable number.

- (A) 4, 3, 7
(B) 8, 9, 5
(C) 8, 7, 4
(D) 7, 3, 4
(E) None of these



30. 
- (A) 
- (B) 
- (C) 
- (D) 
- (E) None of these

Note: The actual Question Paper will translated in Hindi at the time of exam.

Darken your choice with HB Pencil

1	(A)	(B)	(C)	(D)	(E)	11	(A)	(B)	(C)	(D)	(E)	21	(A)	(B)	(C)	(D)	(E)
2	(A)	(B)	(C)	(D)	(E)	12	(A)	(B)	(C)	(D)	(E)	22	(A)	(B)	(C)	(D)	(E)
3	(A)	(B)	(C)	(D)	(E)	13	(A)	(B)	(C)	(D)	(E)	23	(A)	(B)	(C)	(D)	(E)
4	(A)	(B)	(C)	(D)	(E)	14	(A)	(B)	(C)	(D)	(E)	24	(A)	(B)	(C)	(D)	(E)
5	(A)	(B)	(C)	(D)	(E)	15	(A)	(B)	(C)	(D)	(E)	25	(A)	(B)	(C)	(D)	(E)
6	(A)	(B)	(C)	(D)	(E)	16	(A)	(B)	(C)	(D)	(E)	26	(A)	(B)	(C)	(D)	(E)
7	(A)	(B)	(C)	(D)	(E)	17	(A)	(B)	(C)	(D)	(E)	27	(A)	(B)	(C)	(D)	(E)
8	(A)	(B)	(C)	(D)	(E)	18	(A)	(B)	(C)	(D)	(E)	28	(A)	(B)	(C)	(D)	(E)
9	(A)	(B)	(C)	(D)	(E)	19	(A)	(B)	(C)	(D)	(E)	29	(A)	(B)	(C)	(D)	(E)
10	(A)	(B)	(C)	(D)	(E)	20	(A)	(B)	(C)	(D)	(E)	30	(A)	(B)	(C)	(D)	(E)