



INDIAN INSTITUTE OF CRAFTS & DESIGN

WRITTEN ENTRANCE TEST 2012 (For Post Graduate Programme)

Paper: General Awareness, Creativity & Perception Test

Candidate Enrolment No.

Invigilator's Signature

Date: 20th May 2012

Time: 10.00 A.M. to 12.00 A.M.

Total Time: 2 hour

Total marks: 100

Instructions for the candidate

- This paper is divided into two sections: Section A & Section B
- Paper contains total **33** Questions
- Each Question has been allotted marks on the right side of the question
- Read all the questions carefully
- Do not write your name anywhere in the test paper
- Follow the instructions given by the invigilators
- On completion of the test, you should hand over the test paper to the invigilator before leaving the hall
- Make sure you have written your Candidate Enrolment No. correctly and clearly



INDIAN INSTITUTE OF CRAFTS & DESIGN
Section A: General Awareness Test

There are total 25 questions, Each question carries 1 Mark

Q. 1. Which temple dedicated to the sun-god is shaped like a chariot?

- A. Sun Temple, Konark
B. Lotus Temple, New Delhi
C. Surya Pahar Temple, Assam
D. Jagannath Temple, Puri

Q. 2. Which monument was built by the Mughal emperor Akbar?

- A. Qutub Minar
B. Red Fort
C. Charminar
D. Fatehpur Sikhri

Q. 3. Copying a movie is...

- A. Cheaper than buying the real one
B. Okay, as long as you are copying a DVD that you have purchased
C. Illegal, unless you have permission from the copyright owner to do so
D. Both A & B

Q. 4. Sharing music on the internet is...

- A. Illegal, unless you have permission from the copyright owner to do so
B. Allowed only if you are over 18
C. Allowed for everyone
D. None of these

Q. 5. Copyright protects...

- A. Books and magazines
B. Art and photographs
C. All of the above
D. None of these

Q. 6. Which of the following internet travel search companies was first started by Microsoft in 1996 and in the first decade of the 21st century was the largest provider of hotel bookings in the world?

- A. Travelocity
B. Travelscape
C. Orbitz
D. Expedia



INDIAN INSTITUTE OF CRAFTS & DESIGN

- Q. 7. Which of the following uses non-conventional Source of Energy?
- A. Kerosene lamp
B. Wax candle
C. Solar lantern
D. Torch
- Q. 8. Development means economic growth plus
- A. Inflation
B. Deflation
C. Price stability
D. Social change
- Q. 9. Who gave the slogan “You give me blood, I promise you freedom”?
- A. Bhagat Singh
B. Chandra Shekhar Azad
C. Subhash Chandra Bose
D. Bal Gangadhar Tilak
- Q. 10. In banking ATM stands for
- A. Automated Tallying Machine
B. Automatic Teller Machine
C. Automated Totalling Machine
D. Automated Transaction of Money
- Q. 11. What is rhino’s horn made up of:
- A. Hair
B. Nail
C. Ivory
D. limestone
- Q. 12. Who was the first woman pilot of India.
- A. Mamta Banerjee
B. Durba Banerjee
C. Lata Mangeskar
D. Kalpna Chawla
- Q. 13. Ex-miss India, Nafisa Ali, has been all of the following except.
- A. Model
B. Actress
C. Dancer
D. Swimmer
- Q. 14. Which one of the following is not a Nestle brand of chocolates.
- A. Quality Street
B. Kitkat
C. Mithaimagic
D. Truffle
- Q. 15. The fashion major Benetton Group SpA belongs to.
- A. France
B. Italy
C. Taiwan
D. Japan



INDIAN INSTITUTE OF CRAFTS & DESIGN

Q. 16. Harmony – the Furnishing Fabric is a product of.

- A. Bombay Dyeing
B. Only Vimal
C. National Textile Corporation
D. DCM

Q. 17. If CARE is coded as 4 3 2 1 and MARE is coded as 5 3 2 1, then CAME will be coded as:

- A. 4 3 5 2
B. 5 4 3 2
C. 5 4 3 1
D. 4 3 5 1

Q. 18. The Govt of India has decided to declare which of the following rivers a National **River**?

- A. Brahmaputra
B. Yamuna
C. Ganga
D. None of these

Q. 19. Which of the following awards is given by the government of India to recognize outstanding achievement in National sports?

- A. Bharat Ratna
B. Shanti Swamp Bhatnagar Award
C. Dronacharya Award
D. Arjuna Award

In the questions below Qs. 20 and Q 21, names of some animals or birds have been given. Reading downwards in the same order as they are written, use one letter from each to form another animal or bird.

20. PUPPY
VIXEN
TIGER
CAMEL
OTTER
STOAT

- A. PIGLET
B. PARROT
C. PIGEON
D. OXEN



INDIAN INSTITUTE OF CRAFTS & DESIGN

21. RABBIT
KITTEN
PIGLET
DONKEY
HEIFER
- A. LION
C. TIGER
- B. ANT
D. KITE
22. HTML stands for
- A. Hyper Text Markup Language
B. Hyper Text Manipulation Language
C. Hyper Text Managing Links
D. Both A & C
23. Stoneware, earthenware, terracotta, porcelain are forms of _____.
- A. Stone
C. Designer-ware
- B. Clay
D. Play
24. What is potter referred to in Hindi?
- A. Kumhar
C. Tihar
- B. Behar
D. Manihar
25. Tie and Dye
- A. is a technique of strangulation.
C. is a method of tying a tie
- B. is a resist dyeing technique of textiles
D. is a technique of hair dyeing
-



INDIAN INSTITUTE OF CRAFTS & DESIGN

Section B: Creativity and Perception Test




(Q. No 26 to Q. 36)

Each Question has been allotted marks on the right side of the question

Objectives of the test :

1. To assess your abilities such as estimate of sizes & proportion
2. To assess skills of observation and synthesis
3. To assess abilities of visual interpretation

Q. 26. What is the difference between these speech bubbles? Explain it in not more than 150 words in the below given space. (10)



Ans:



INDIAN INSTITUTE OF CRAFTS & DESIGN

Q. 27. Is this art? Why or why not? Explain it in 100 words in the below given space. (10)



Ans:



INDIAN INSTITUTE OF CRAFTS & DESIGN

Q. 28. What do these gestures signify? Explain any Two why? What alternate usage can they have? (10)

A.



B.



Sample Paper



INDIAN INSTITUTE OF CRAFTS & DESIGN

C.



Sample Paper



INDIAN INSTITUTE OF CRAFTS & DESIGN

Q. 29. What do you think is happening between these two characters? Describe it in 100 words in the below given space. (10)




Ans:



INDIAN INSTITUTE OF CRAFTS & DESIGN

Q. 30. What can you tell about the person when you see this portrait? Describe it in 100 words in the below given space. (05)



Ans:



INDIAN INSTITUTE OF CRAFTS & DESIGN

Q. 31. In the given square, the following 10 objects need to be placed. (10)

- | | |
|---------------|-------------------|
| 1) Cup | 6) Pen Stand |
| 2) Table | 7) Floor mat |
| 3) Chair | 8) Table calendar |
| 4) Curtain | 9) Lamp |
| 5) Television | 10) Ant |

Ans:

Sample Paper



INDIAN INSTITUTE OF CRAFTS & DESIGN

Q. 32. Name the craft technique. Explain the story behind any ONE of the images shown below. Explain it in 100 words in the below given space. (10)

A.



Ans:



B.



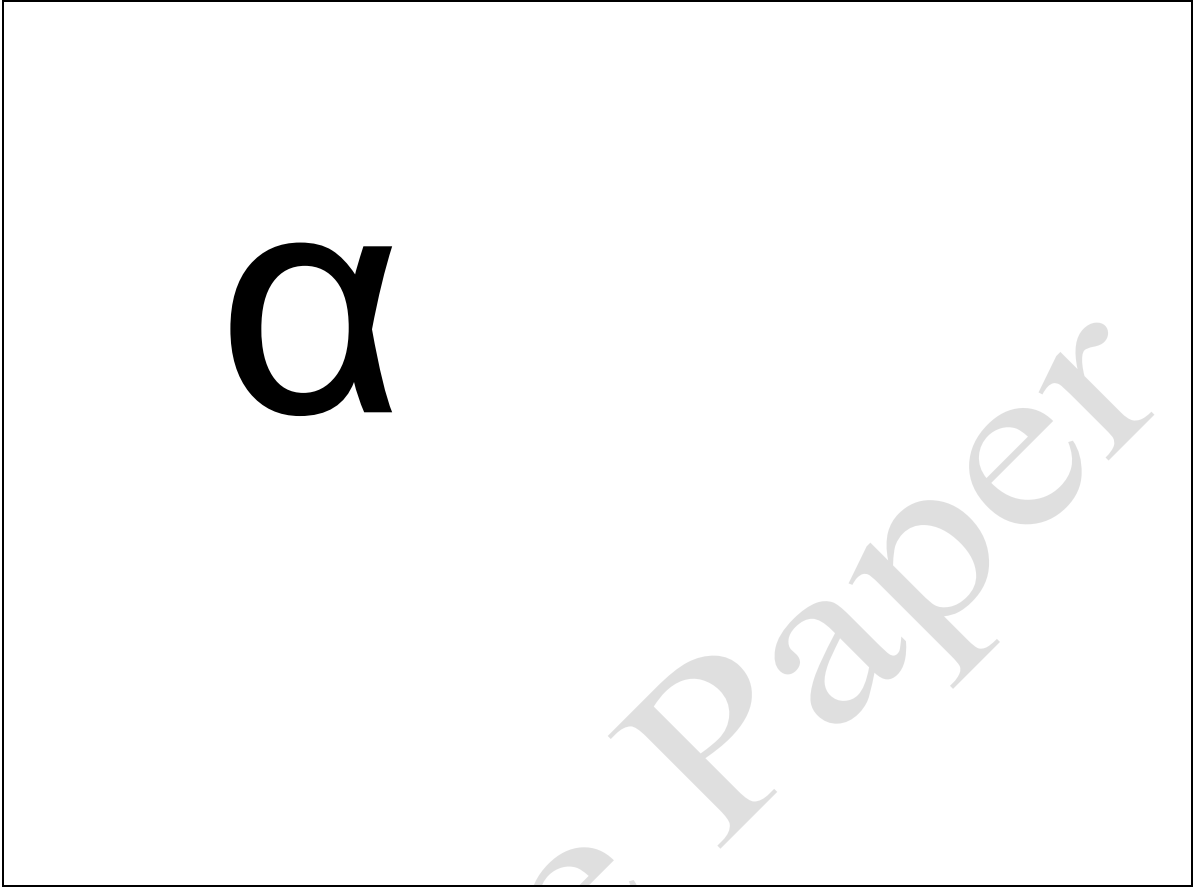
Ans:

Sample Paper



INDIAN INSTITUTE OF CRAFTS & DESIGN

Q. 33. Complete the figure, and give a title to it. (10)



Ans:

Sample Paper



INDIAN INSTITUTE OF CRAFTS & DESIGN

Extra Sheet

Sample Paper