



## YATT Junior-SAMPLE PAPER

### CLASS 2

- Each Question carries one mark.
- Each question has four options. Tick the right option.
- Total Marks :50

#### ENGLISH

**Q1. Please see the four lines below and find out which is not a correct sentence.**

- a) Juliet is a pretty girl.
- b) I like to play cricket.
- c) The dog thirsty.
- d) The fox jumped over the wall.

Ans-c

**Q2. Which is the correct plural of the following noun.**

DRESS

- a) Dresss
- b) Dresses
- c) Drishes
- d) None of these

Ans-b

**Q3. Which is the correct plural of the following noun.**

DIARY

- a) Diarys
- b) Diaryes
- c) Diaries
- d) None of these

Ans-c

**Q4. In the following sentence, find out the pronoun.**

**The girl was very hungry. She looked for food.**

- a) Was
- b) The
- c) She
- d) for

Ans-c

**Q5. In the following sentence, find out the pronoun.**

**This notebook is very good. It has many pages.**

- a) This
- b) is
- c) has
- d) It

Ans-d

**Q6.Fill in the blanks:**

John went to \_\_\_\_\_ Zoo.He saw \_\_\_\_\_ tiger and \_\_\_\_\_ owl.

- a)an,the,a      b)a,an,the      c) the,a,an      d)None of these

Ans-c

**Q7.Fill in the blanks:**

\_\_\_\_\_ bought a toy.\_\_\_\_\_ toy is very nice.

- a)It,The      b)They,An      c)He,an      d)I,The

Ans-d

**Q8.Match the baby to the mother .**

BABY	MOTHER
A.Chick	D.Mare
B.Lamb	E.Hen
C.Colt	F.Ewe

- a) A-F ; B-D ;C-E      b)A-E ;B-F ; C-D      c) A-E ; B-D ;C-F      d)A-F ;B-D ; C-E

Ans-b

**Q9.What is missing in the following sentence.**

We \_\_\_\_\_ to school every day.

- a)I      b)want      c)go      d)is

Ans-c

**Q10.Fill in the blank with the correct pronoun.**

Mohit is going with \_\_\_\_\_ to the Cinema Hall.

- a)they      b)we      c)them      d)All of these

Ans-c

**Q11.Which of the following are examples of uncountable nouns ?**

- 1)Four bananas
- 2)Little rice
- 3) Lot of water
- 4) Ten apples

- a)1 , 2 and 3      b) 2 and 3      c) 3 and 1      d) 1,2,3 and 4

Ans-b

**Q12. Which of the following three sentences are correct .**

**I. I played with my friend tomorrow.**

**II. I played with my friend yesterday.**

**III. I play with my friend yesterday.**

- a) I and II      b) Only III      c) Only II      d) I, II and III

Ans-c

**Q13. Read the sentence given below and choose the right option from the three choices ,if you have to change this sentence into the past tense.**

**Sunil is speaking to his father.**

**I. Sunil speaked to his father.**

**II. Sunil spoke to his father.**

**III. Sunil speak to his father yesterday.**

- a) III      b) I      c) II and III      d) II

Ans-d

**Q14. What is the present tense of Poured.**

- a) Pours      b) Pouring      c) Pour      d) All of these

Ans-c

**Q15. Convert this sentence to future tense.**

**I ate a dosa for lunch.**

- a) I eat a dosa for lunch      b) I eating a dosa tomorrow  
c) I will eat a dosa for lunch.      d) I am eat a dosa for lunch.

Ans-c

**Q16. Complete the following sentences using is ,am or are ?**

i) Karan \_\_\_\_\_ my classmate.

ii) Suman \_\_\_\_\_ very pretty.

iii) Karan and Suman \_\_\_\_\_ my classmates.

- a) am ; are ; is      b) is ; is ; are      c) are ; is ; are      d) is ; is ; is

Ans-b

**Q17. Choose the sentence which is written correctly.**

- a) Raj malhotra was born in the year 1960.  
b) raj malhotra was born in the year 1960.  
c) Raj Malhotra is born in the year 1960.  
d) Raj Malhotra was born in the year 1960.

Ans-d

**Q18. Which word out of the following best fits in the blank .**

**The school bell rang \_\_\_\_\_.**

- a) Loud
- b) Louder
- c) Loudly
- d) All the above

Ans-c

**Q19. The following sentence is jumbled up. Which of the options puts it in the right order.**

**The fence the horse over jumped**

- a) The fence jumped over horse.
- b) The horse jumped over the fence.
- c) The horse over jumped the fence.
- d) The fence jumped the horse over.

Ans-b

**Q20. What is the opposite of big.**

- a) Large
- b) short
- c) small
- d) dig

Ans-c

**Q21. Which is the correct word contraction in place of the underlined word in the following sentence.**

**We had been playing a hockey match the whole morning ,but we were not tired.**

- a) Whereint
- b) weren't
- c) wrenot
- d) None of these

Ans-b

**Q22. Write a synonym (similar meaning word) for Afraid.**

- a) sacred
- b) brave
- c) fearful
- d) Both a and c

Ans-d

**Q23. What is the plural of wife.**

- a) Wifes
- b) Wifey
- c) Wives
- c) Wifees

Ans-c

**Q24. Which is the adjective which makes the following sentence correct ?**

**A Train is \_\_\_\_\_ than a rickshaw.**

- a) fast
- b) fasten
- c) faster
- d) fastest

Ans-c

**Q25. Which is the adjective which makes the following sentence correct ?**

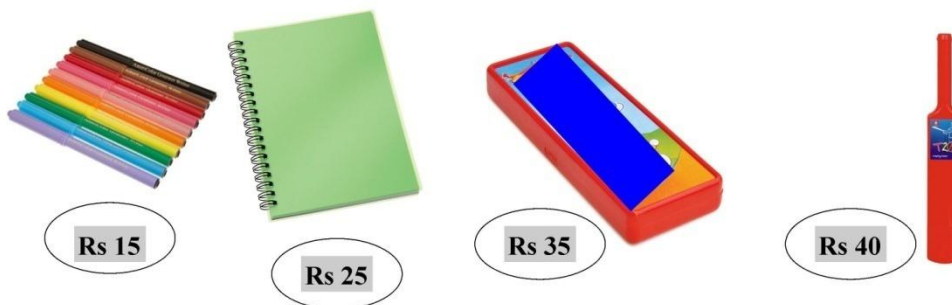
Arjun is a \_\_\_\_\_ man.

- a)strongest    b)stronger    c)strongest    d)strong

Ans-d

**GENERAL INTELLIGENCE**

**Q26.Suresh has Rs 50 in his pocket.Pick the two things that he can buy ? See the options below.**



- a)One Notebook & One Bat  
b)One Pack of pens & One Pencil Box  
c)Two Pencil Boxes  
d) One Bat and One Pack of Pens


Ans-b ; Rs 15(Pack of Pens) plus Rs 35 (Pencil box)=Rs 50

**Q27.Suresh's elder sister has Rs 90.Out of the same items as given above,what can she buy out of the following options.**

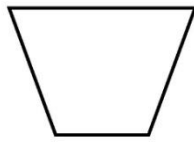
- a)Four Notebooks.  
b)Three Pencil boxes.  
c)Three bats  
d)Six Pack of pens

Ans-d:Rs 15 x 6 packs=Rs 90

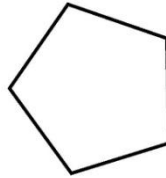
**Q28. Which of the following figures is different from the other three ?**




**a**



**b**



**c**



**d**

Ans-c ;

All the other three figures have four sides. This one has five sides, hence it is different.

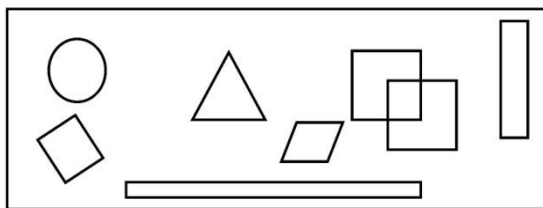
**Q29. What is the time shown in this clock.**



- a) 2 PM      b) 1:50 AM      c) 10 AM      d) 10:10 PM

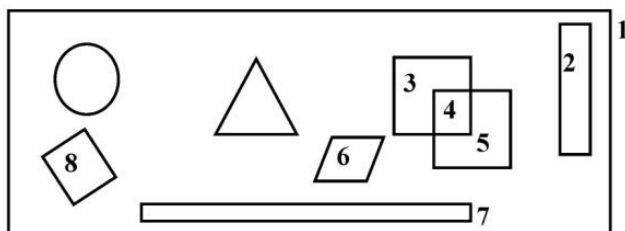
Ans-b

**Q30. How many four sided shapes are there in the following figure.**



- a) 8      b) 6      c) 10      d) 5

Ans-a



**Q31. I am an even, one-digit number. I am greater than 6. What number am I ?**

- a) 7                      b) 8                      9)                      d) 10

Ans-b

**Q32. I am a two digit number greater than 55 but less than 64. I have the digit 7 in units place . What number am I.**

- a) 56                      b) 62                      c) 67                      d) 57

Ans-d

**Q33. Kamal is 21 years old. Satish is 5 years older than John and 2 years younger than Kamal. How old is John?**

- a) 12 years                      b) 14 years                      c) 19 years                      d) 21 years

Ans-b-14 years

Kamal: 21 years ; Satish is 2 years younger than Kamal ie  $21 - 2 = 19$  years ; Satish is 5 yrs older than John. This means John is 5 yrs younger than Satish. Hence John is  $19 - 5 = 14$  yrs.

**Q34. What comes in place of the question mark ?**

<b>2</b>	<b>4</b>	<b>6</b>	<b>?</b>	<b>10</b>	<b>12</b>
----------	----------	----------	----------	-----------	-----------

- a) 5                      b) 9                      c) 8                      d) None of these

Ans-c-8

This is a table of two, hence the missing number is 8.

**Q35. Which of the following will give the best estimate of a persons weight ?**

- a) Centimeters                      b) litres                      c) kilometres                      d) Kilograms

Ans-d

**Q36. Which number will match the word name given below:**

**ONE HUNDRED SIXTY ONE**

- a) 151                      b) 161                      c) 116                      d) 164

Ans- b

**Q37. In the school, a box containing balls fell from the cupboard. Sunil, Ram and Shyam picked up the balls . Total how many balls did they pick up.**



- a)7                      b)12                      c)14                      d)10

Ans-b : (4 + 3 + 5 =12 )

**Q38.**There were a total of 11 dogs in the park.If 3 dogs left by the park gate,how many were left in the park?

- a)9      b)14      c)8      d)7

Ans-c

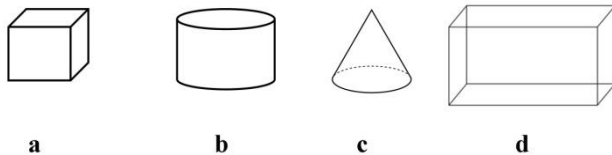
**Q39.**Jayant started to walk from his school. Jayant walked for 1 km.Then he rested for 10 minutes.Then he ran for 2 kms. After 2 kms,he came to an ice cream shop where he stopped and had an ice cream.He then went home.His home was 3 kms from the shop.Total how much distance did he cover from his school to home.

- a)5 Kms                      b)7 Kms                      c)6 Kms                      d)8 kms

Ans-c

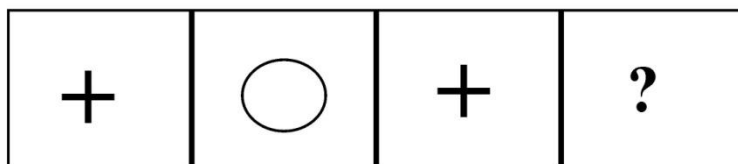
(1 + 2 + 3 =6 Kms)

**Q40.** Which of the following is a cube ?



Ans-a

**Q41.**What comes next ?

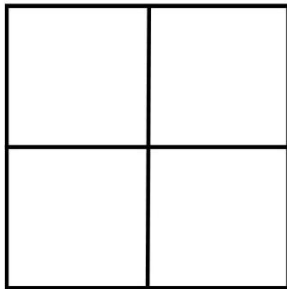


- a) +      b) X      c) ○      d) —

Ans-c



**Q42. How many rectangles are there in the following figure.**



- a)5      b)7      c)6      d)4

Ans-a

**Q43. Which letter appears in the middle of the following word.  
AMBULANCE**

- a)U    b)A    c)l    d)L

Ans-d-L

**Q44. If today is Monday, which day was just before yesterday?**

- a)Sunday    b)Friday    c)Wednesday    d)Saturday

Ans-d

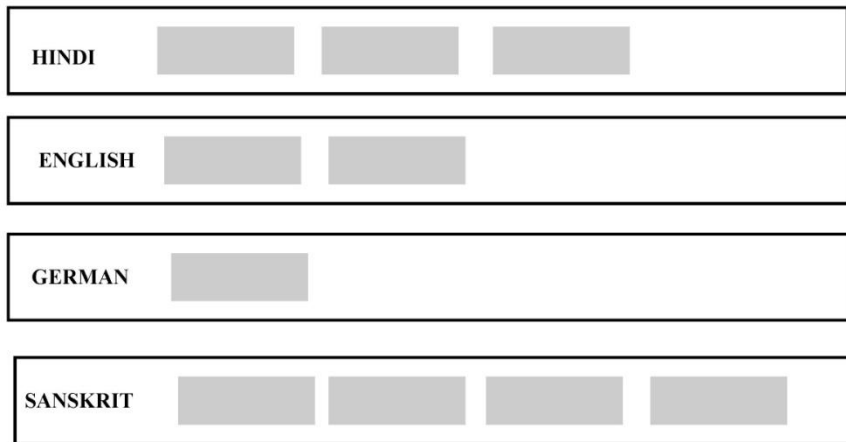
**Q45. Arjun's teacher said she will take the next class on the 3<sup>rd</sup> Friday of February. The calendar for February is given below. On what date will be the next class?**

February 2017						
Sun	Mon	Tues	Wed	Thurs	Fri	Sat
29	30	31	1	2	3	4
5	6	7	8	9	10	11
12	13	14	15	16	17	18
19	20	21	22	23	24	25
26	27	28	1	2	3	4

- a)3      b)17      c)23      d)18

Ans-b

The following figure represents attendance of students in different language classes on a single day. Each rectangle represents ten students. Answer Question Nos 46-49 based on this figure.



**Q46.** How many students were present in the English class ?

- a)10      b)15      c)20      d)Cannot say

Ans-c

**Q47.** In which language class where the maximum number of students present ?

- a)Hindi      b) German      c) Sanskrit      d)English

Ans-c

**Q48.** How many more students were present in the English class than in the German class?

- a)10      b)15      c)20      d)Cannot say

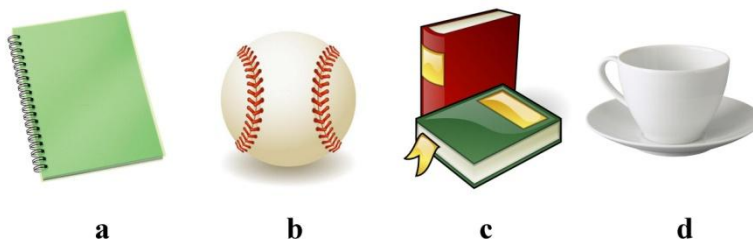
Ans-a

**Q49.** In which language class where number of students present the least ?

- a)Hindi      b) German      c) Sanskrit      d)English

Ans-b

**Q50.** Which of the following will be the heaviest in weight ?



Ans-c