

INTERNATIONAL TALENT HUNT OLYMPIAD 2017


iTHO

Organized by :

**Society of Science
Education**

New Delhi, India

FOR SUPREMACY IN SCIENCE & MATHEMATICS


www.silverzone.org

**Class 3rd****Syllabus & Sample Questions**

Living and Non-living things, Animal kingdom, Our body, Food we eat, Clothes we wear, Shelters and Homes, Our neighbourhood, Work we do, Air, Water and Soil, Means of transport and communication, Solar system, Number system, Unitary Method, Fractions, Time and Calendar, Money, Length, Mass, Capacity, Geometry, Data representation, Symmetry and Pattern, Analogy, Blood relation, Classification, Series of alphabet & Direction Test.

The actual question paper contains 50 questions. The duration of the test paper is 60 minutes.

1. Choose the thing from the followings, which is living but can not move from one place to other.

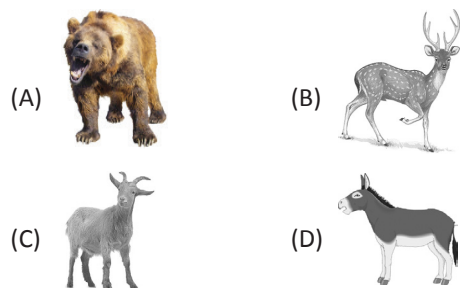


(E) None of these

2. Water is the habitat for which one of the following plant?

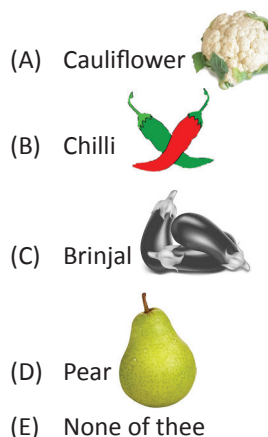
(A) Lotus plant (B) Cactus plant
(C) Babool plant (D) Sugar plant
(E) None of these

3. Identify the deer from the following choices.



(E) None of these

4. Which one of the following has bitter taste?



5. The sun sets in the:

(A) West
(B) East
(C) South
(D) North
(E) None of these

6. If 552 chairs are arranged in 12 equal rows then find the total number of chairs in each row?

(A) 46
(B) 55
(C) 56
(D) 44
(E) None of these

7. What time does the following watch shows?



- (A) 4 : 40
- (B) 3 : 20
- (C) 3 : 40
- (D) 5 : 20
- (E) None of these

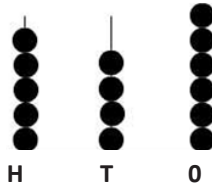
8. If today is Friday, what day was yesterday?

- (A) Thursday
- (B) Saturday
- (C) Sunday
- (D) Wednesday
- (E) None of these

9. In a class test Rakhi secured 10 more marks than Nidhi. Nidhi secured 5 more marks than the passing marks. If passing marks is 25 then how much marks did Rakhi secure?

- (A) 40
- (B) 35
- (C) 45
- (D) 25
- (E) None of these

10. Guess the number in words by counting the beads?



- (A) Five hundred
- (B) Five hundred and forty six
- (C) Six hundred and sixty four
- (D) Five hundred and forty
- (E) None of these

11. 'Hot' and 'Cold' has certain relationship. Find which of the following pairs have the same relationship.

- (A) Big and Tall
- (B) Long and Tall
- (C) Huge and Large
- (D) Thin and Fat
- (E) None of these

12. Find the odd one out.

- (A) A
- (B) L
- (C) I
- (D) E
- (E) None of these



Answers

- | | | | | | |
|--------|--------|--------|---------|---------|---------|
| 1. (C) | 2. (A) | 3. (B) | 4. (B) | 5. (A) | 6. (A) |
| 7. (C) | 8. (A) | 9. (A) | 10. (B) | 11. (D) | 12. (B) |