

# 14<sup>th</sup> International Informatics Olympiad



Organized by:  
**SILVERZONE**  
FOUNDATION  
NEW DELHI - INDIA

In association with:  
**COMPUTER LITERACY FOUNDATION**  
New Delhi, India  
Promoting Computer Science Education  
[www.silverzone.org](http://www.silverzone.org)

## CLASS 2<sup>nd</sup> SYLLABUS & SAMPLE QUESTIONS

❖ Basics of Computer ❖ Input/Output and Processing ❖ Keyboard and Mouse Usage ❖ Introduction to Window 10 ❖ Data and Information ❖ Introduction to Wordpad ❖ Usage of Computers in daily life ❖ Drawing in paint brush ❖ Mental ability & Reasoning

*The Actual Question Paper Contains 40 Questions. The Duration of the Test Paper is 60 Minutes.*

1. In computing, which one of the following is a device that optically scans images, printed text, handwriting or an object and converts it into a digital image?



(A) CD-ROM  
(E) None of these



(B) Scanner



(C) Printer



(D) Laptop

2. Given below the figures of the parts of a computer. Match them correctly with the details given on the other side.



(A) Used to type letters



(B) Resemblance with the mouse



(C) Displays the commands







(D) Works like a brain.

(A) 1 → D, 2 → C, 3 → B, 4 → A  
(C) 1 → C, 2 → A, 3 → B, 4 → D  
(E) None of these

(B) 1 → A, 2 → B, 3 → C, 4 → D  
(D) 1 → C, 2 → D, 3 → B, 4 → A

3. To get the solution of a problem, computer has to perform certain actions. Which one of the following is the correct sequence for entering input and getting the result?

- A. 
  - B. 
  - C. 
  - D. 
- (E) None of these

4. As we know, the word **COMPUTER** means, a device that computes. What do you understand by **COMPUTATION**?

- 1. Performing Arithmetic Operations
  - 2. Performing Logical Operations
  - 3. Perform Controlling Operations
- (A) Only 1                      (B) Only 2                      (C) Both 1 and 2                      (D) Only 3  
 (E) None of these

5. The brain of any computer system is:

- (A) ALU
- (B) Memory
- (C) CPU
- (D) Control Unit
- (E) None of these

6. **CD-ROM** stands for \_\_\_\_\_.

- (A) Compact Disk Random Access Memory
- (B) Compact Disk Read Only Memory
- (C) Common Disk Read Only Memory
- (D) Compact Data Random Access Memory
- (E) None of these

7. Which one of the following statements is not an example of *Logical Operation*?

- 1. Family = Mother + Father + Brothers + Sisters
  - 2. If Total Marks > 500 then Say "1st Prize"
  - 3. If Brothers + Sisters > 4 Then Say "Big Family"
- (A) Only 1                      (B) Only 2                      (C) Both 1 and 2                      (D) Both 1 and 3  
 (E) None of these

8. Which is/are the true statement?

- 1. Clicking the mouse implies clicking left button of the Mouse.
  - 2. Right click implies pressing and releasing the right Mouse button once.
  - 3. The right Mouse button is never double-clicked.
- (A) Only 1 is correct                      (B) Both 2 and 3 are correct  
 (C) Both 1 and 2 are true                      (D) 1, 2 and 3 statements are correct  
 (E) None of these

9. Replace appropriate operators in the following expression.

$(3 \times 9) - (18 \text{ divided by } 3)$

- (A)  $(3 \times 9) - (18 \% 3)$  (B)  $(3 * 9) - (18 - 3)$   
 (C)  $(3 * 9) - (18 / 3)$  (D)  $(3 * 9) - (18 | 3)$   
 (E) None of these

10. The keys used to insert letters like A, B, C etc. are \_\_\_\_\_.

- (A) Special keys (B) Alphabet keys  
 (C) Navigation keys (D) Function keys  
 (E) None of these

11. How does computer help a doctor to treat the patients?

- (A) Computer keeps the record of the patient.  
 (B) With the help of computer, doctors examine the internal organ of a patient.  
 (C) Computers can be used to perform research in health sector.  
 (D) All are correct  
 (E) None of these

12. Which of the following is true about input devices?

- (1) Flatbed is a type of scanner.  
 (2) Microphone is used as speaker with computer  
 (3) Lightpen helps you to draw pictures on monitor.  
 (A) Only 2 and 3 (B) Only 1 and 3 (C) Only 1 and 2 (D) All are correct  
 (E) None of these

13. Which figure fits next in the sequence given below?



- (A)  (B)  (C)  (D)   
 (E) None of these

14. Fill in the empty box above with the correct picture from below.



- (A)  (B)  (C)  (D)   
 (E) None of these

15. Using computer at offices makes the work \_\_\_\_\_.

- (A) Slow (B) Boring (C) Fast (D) Tedious  
 (E) None of these



**ANSWERS**

1. B 2. D 3. D 4. C 5. C 6. B 7. D 8. D  
 9. C 10. B 11. D 12. B 13. C 14. A 15. C