



# Delhi Public School, Gwalior

Class – V

Subject – Environmental Studies


Model Test Paper

Time- 1 Hr. 30 min.

Name \_\_\_\_\_ Sec \_\_\_\_\_ Roll no \_\_\_\_\_ Date \_\_\_\_\_

## I. Observation

(A)




(a) Identify the famous personality.  
\_\_\_\_\_

(b) At the time of birth she was  
\_\_\_\_\_.

(c) The national centre after her name  
is situated at \_\_\_\_\_.

(B)



(a) Illegal killing of animals is known  
as \_\_\_\_\_.

(b) The Indian rhino is being killed for  
its \_\_\_\_\_ as it has  
some \_\_\_\_\_ properties.

## II. Fill in the blanks:-

- (1) Air is a \_\_\_\_\_ of many gases.
- (2) Traditional Indian families were mostly \_\_\_\_\_ dominated.
- (3) The two cross-pieces that rest on each group of the stumps are called the  
\_\_\_\_\_.
- (4) Forests are called \_\_\_\_\_ of the environment.

- (5) Animals are our national \_\_\_\_\_ and must be protected.
- (6) A person who leads the game is known as \_\_\_\_\_.
- (7) The fast moving air is \_\_\_\_\_.
- (8) Gandhiji worked for the \_\_\_\_\_ of Harijans.
- (9) An \_\_\_\_\_ can spot its prey from miles away.
- (10) Deaf and dumb people can learn to speak through the \_\_\_\_\_ language.

**III. Answer in one word.**

- (1) Study of families. \_\_\_\_\_
- (2) Modern name of pehlwani. \_\_\_\_\_
- (3) The gently moving air. \_\_\_\_\_
- (4) The passage behind nostrils. \_\_\_\_\_
- (5) Milk giving animals. \_\_\_\_\_
- (6) Process of breathing. \_\_\_\_\_
- (7) Holes present in leaves. \_\_\_\_\_
- (8) Children born to the same parents. \_\_\_\_\_
- (9) Cutting down of forests. \_\_\_\_\_
- (10) People of God. \_\_\_\_\_

**IV. State whether “True” or “False”.**

- (1) Families shift from place to place just for fun. \_\_\_\_\_
- (2) Poachers are the people who hunt wild animals illegally. \_\_\_\_\_
- (3) Pollution affects wild animals. \_\_\_\_\_
- (4) A cobbler stitches our clothes. \_\_\_\_\_
- (5) Most of the air is comprised of nitrogen. \_\_\_\_\_
- (6) The wind helps the sailboat to sail in the seas. \_\_\_\_\_
- (7) Kung Fu is a martial art from Mizoram. \_\_\_\_\_
- (8) Archery is an individual sport. \_\_\_\_\_

(9) People who have lost their limbs can benefit by using artificial limbs. \_\_\_\_\_

(10) Payasam is prepared only in Gujarat. \_\_\_\_\_

**V. Multiple choice question. Tick (✓) the correct option.**

1. \_\_\_\_\_ is a mental attribute.  
(a) Hobby (b) Height  
(c) Complexion (d) colour of eyes
2. \_\_\_\_\_ is a traditional game.  
(a) Cricket (b) Hockey (c) Football (d) Kabaddi
3. Composition of oxygen in air is \_\_\_\_\_.  
(a) 78% (b) 21% (c) 68% (d) 31%
4. Which is not an animal product?  
(a) Leather (b) Milk (c) Pearl (d) Cotton
5. \_\_\_\_\_ don't have ears but feel sound waves.  
(a) Snakes (b) Eagles (c) Honey-bees (d) Cats
6. Plants use \_\_\_\_\_ to prepare food.  
(a) Oxygen (b) Carbon-dioxide  
(c) Nitrogen (d) None
7. \_\_\_\_\_ is not a martial art.  
(a) Kung fu (b) Wushu (c) Judo (d) Gilli Danda
8. \_\_\_\_\_ is an individual game.  
(a) Shooting (b) Hockey  
(c) Cricket (d) Kabaddi
9. Dal-Bati-Choorma is a special dish of \_\_\_\_\_.  
(a) Punjabi (b) Rajasthan (c) Gujarat (d) Kerala
10. Green pigment present in leaves is \_\_\_\_\_.  
(a) stomata (b) oxygen (c) chlorophyll (d) none

**VI. Write the full forms of :-**

- (a) CWG \_\_\_\_\_
- (b) WWF \_\_\_\_\_
- (c) ADAPT \_\_\_\_\_
- (d) ICL \_\_\_\_\_

**VII. (A) Identify the pictures.**



\_\_\_\_\_

\_\_\_\_\_

**(B) Twisted questions:**

- (1) Cyclones take place in the \_\_\_\_\_.  
(a) mountain                      (b) coastal areas                      (c) plains
- (2) Land pollution is caused by excessive use of \_\_\_\_\_.  
(a) manure                      (b) fertilizer                      (c) pesticide

**VIII. Define the following terms:**

- (a) Demolition  
\_\_\_\_\_  
\_\_\_\_\_  
\_\_\_\_\_  
\_\_\_\_\_  
\_\_\_\_\_

(b) Family

---

---

---

---

(c) Photosynthesis

---

---

---

---

**IX. Answer the following questions. (Any five)**

Q.1 What is migration? Give reasons.

Ans. 

---

---

---

---

---

---

---

---

---

---

Q.2 Why are animals endangered?

Ans. 

---

---

---

---

---



---

---

---

Q.6 What do you mean by differently abled or physically challenged people?

---

---

---

---

---

---

---

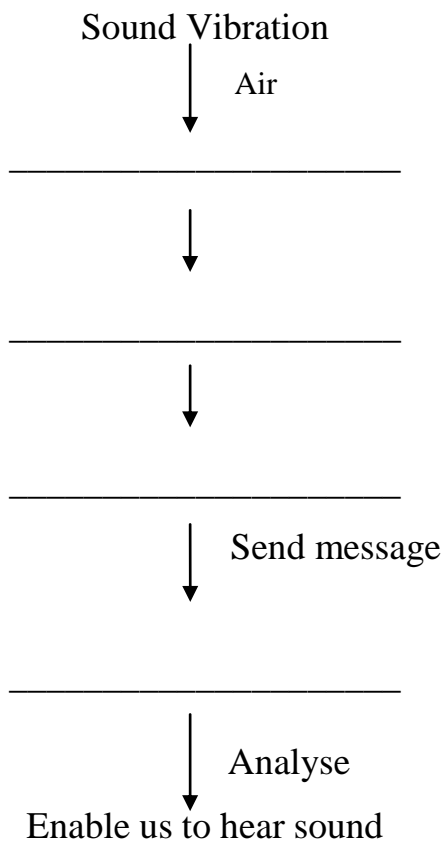
---

---

---

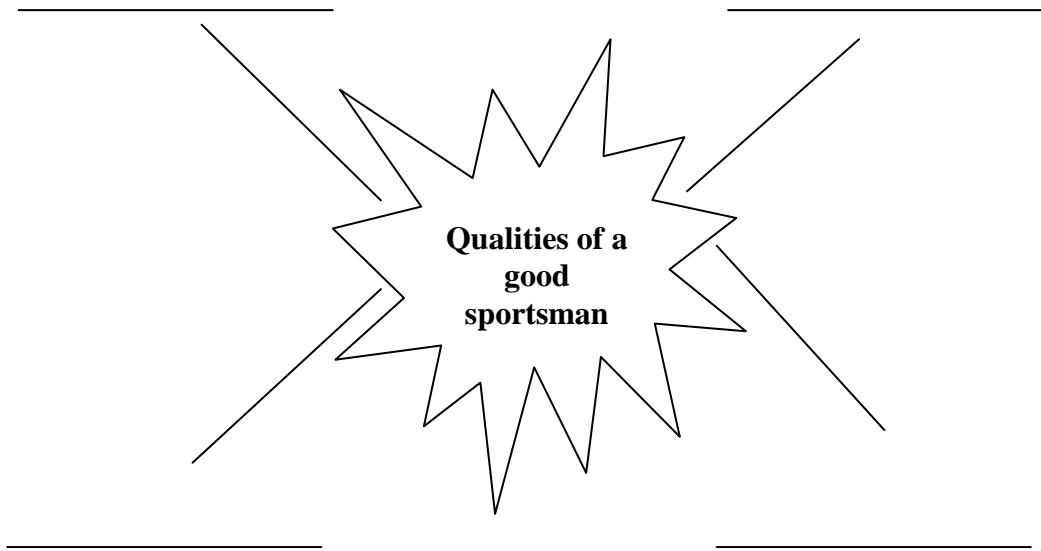
**X. Complete the following activities.**

1. Flow Chart

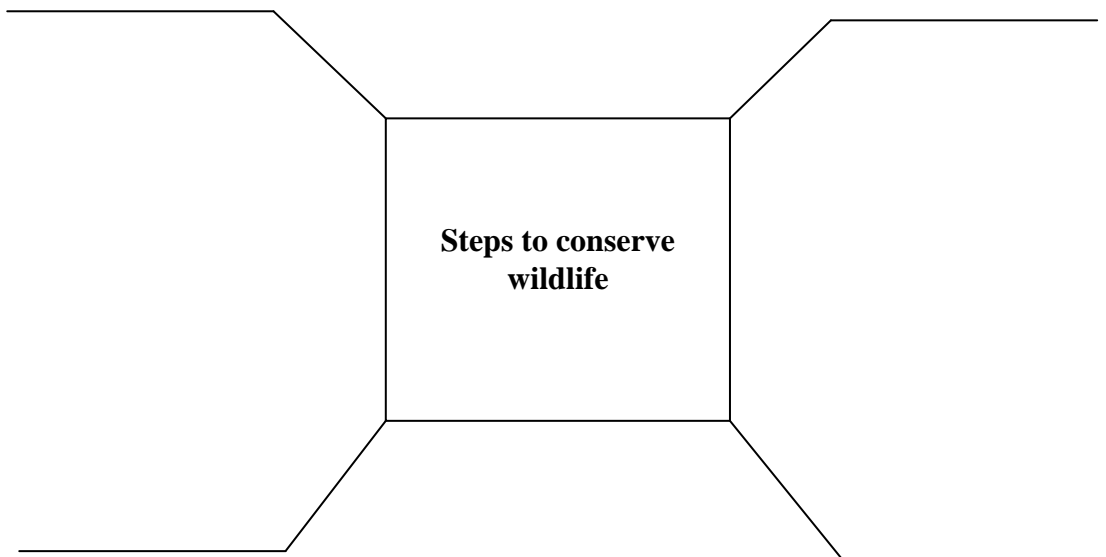


2. Web Charts.

(A)



(B)





**XI. Draw and label the diagrams.**

1. Human Respiratory System
2. Composition of Air