



# Delhi Public School, Gwalior

Class – IV

Subject – Environmental Studies

Model Test Paper

Time- 1 Hr. 30 min.

Name \_\_\_\_\_ Sec \_\_\_\_\_ Roll no \_\_\_\_\_ Date \_\_\_\_\_

## I. Observation

(A)



(a) Identify the astronaut.

\_\_\_\_\_

(b) She was selected by \_\_\_\_\_ to be trained as an astronaut.

(c) She stayed in space for \_\_\_\_\_ days.

(B)



(a) Identify the famous personality.

\_\_\_\_\_

(b) She is a \_\_\_\_\_ parent.

(c) She adopted children from an \_\_\_\_\_.

## II Fill in the blanks:-

(1) A small family is called \_\_\_\_\_ family.

(2) Mother's relatives are called \_\_\_\_\_ relatives.

- (3) We should not discriminate between people on the basis of \_\_\_\_\_.
- (4) The fish is \_\_\_\_\_. I cannot hold it.
- (5) \_\_\_\_\_ is the basic unit of society.
- (6) A \_\_\_\_\_ flies an aeroplane.
- (7) The doctors study and are trained for their profession at \_\_\_\_\_ college.
- (8) Some \_\_\_\_\_ animals are put into herds by humans.
- (9) The practice of rearing honey bees is called \_\_\_\_\_.
- (10) Roots absorb \_\_\_\_\_ from the soil.

### III Answer in one word:-

- (1) A large group of frogs. \_\_\_\_\_
- (2) People who mend our shoes. \_\_\_\_\_
- (3) The food that never spoils. \_\_\_\_\_
- (4) Animals that give birth to young ones and produce milk to feed them. \_\_\_\_\_
- (5) Special script for visually impaired. \_\_\_\_\_
- (6) The sweet liquid produced by flowers. \_\_\_\_\_
- (7) It is used to treat minor injuries. \_\_\_\_\_
- (8) Thinnest skin of our body. \_\_\_\_\_
- (9) Coloured part of a flower. \_\_\_\_\_
- (10) Animals who hunt other animals. \_\_\_\_\_

### IV State whether true or false :-

- (1) Grass has fibrous roots. \_\_\_\_\_
- (2) A potter makes pots on a potter's wheel. \_\_\_\_\_
- (3) We take important decisions collectively. \_\_\_\_\_
- (4) Slapping is a good touch. \_\_\_\_\_

- (5) Hockey is an indoor game. \_\_\_\_\_
- (6) Children who play with us are our playmates. \_\_\_\_\_
- (7) To play stappoo we need a thippi. \_\_\_\_\_
- (8) A doctor builds bridges. \_\_\_\_\_
- (9) A group of fish is called troop. \_\_\_\_\_
- (10) Carpel is the green part of flower. \_\_\_\_\_


**V Tick the correct option (✓) (MCQ).**

- (1) The stingless male bee in beehive.  
(a) Drone bee (b) Queen bee (c) Workers bee (d) None
- (2) People who sell flowers.  
(a) Grocer (b) Green grocer (c) Florist (d) Cobbler
- (3) \_\_\_\_\_ is a shy animal.  
(a) Lion (b) Cow (c) Squirrel (d) Tiger
- (4) Thickest skin of our body.  
(a) Eyelid (b) Hands (c) Face (d) Footsole
- (5) Which of the following game is not played in the field?  
(a) Cricket (b) Hockey (c) Football (d) Carrom
- (6) A powerful special vehicle that takes astronauts safely into space.  
(a) Space agency (b) Space shuttle (c) Aeroplane (d) Helicopter
- (7) The person who builds bridges.  
(a) Engineer (b) Pilot (c) Plumber (d) Blacksmith
- (8) \_\_\_\_\_ bee guards the hive.  
(a) King (b) Queen (c) Worker (d) none
- (9) The hair like structures hanging from a banyan tree are called \_\_\_\_\_.  
(a) aerial root (b) taproot (c) fibrous root (d) stem
- (10) A flower develop from \_\_\_\_\_.  
(a) bud (b) root (c) leaf (d) stem

**VI Write the full forms of the following :-**

- (1) LBW - \_\_\_\_\_
- (2) NASA - \_\_\_\_\_
- (3) CWG - \_\_\_\_\_
- (4) P.Ed. - \_\_\_\_\_

**VII (A) Identify the pictures :-**



\_\_\_\_\_

\_\_\_\_\_

**(B) Twisted questions.**

- (1) Sweat dries up due to \_\_\_\_\_.  
(a) condensation                      (b) Precipitation                      (c) Evaporation
- (2) If we stand facing the setting sun, the \_\_\_\_\_ is in front of us.  
(a) North                                      (b) West                                      (c) East

**VIII Define the following terms.**

- (a) Pollination  
\_\_\_\_\_  
\_\_\_\_\_  
\_\_\_\_\_

(b) Occupation

---

---

---

(c) Photosynthesis

---

---

---

**IX Answer the following questions. (Any Five)**

1. What are team games? Give some examples.

Ans. 

---

---

---

---

---

2. What is a family?

Ans. 

---

---

---

---

---

3. Why do animals live in groups?

Ans. 

---

---

---

---

---

---

---

4. Why is playing important?

Ans.

---

---

---

---

---

---

---

---

---

---

5. Differentiate between immediate family and extended family.

<hr/>	<hr/>
<hr/>	<hr/>
<hr/>	<hr/>
<hr/>	<hr/>
<hr/>	<hr/>
<hr/>	<hr/>
<hr/>	<hr/>

6. What are the functions of the roots?

---

---

---

---

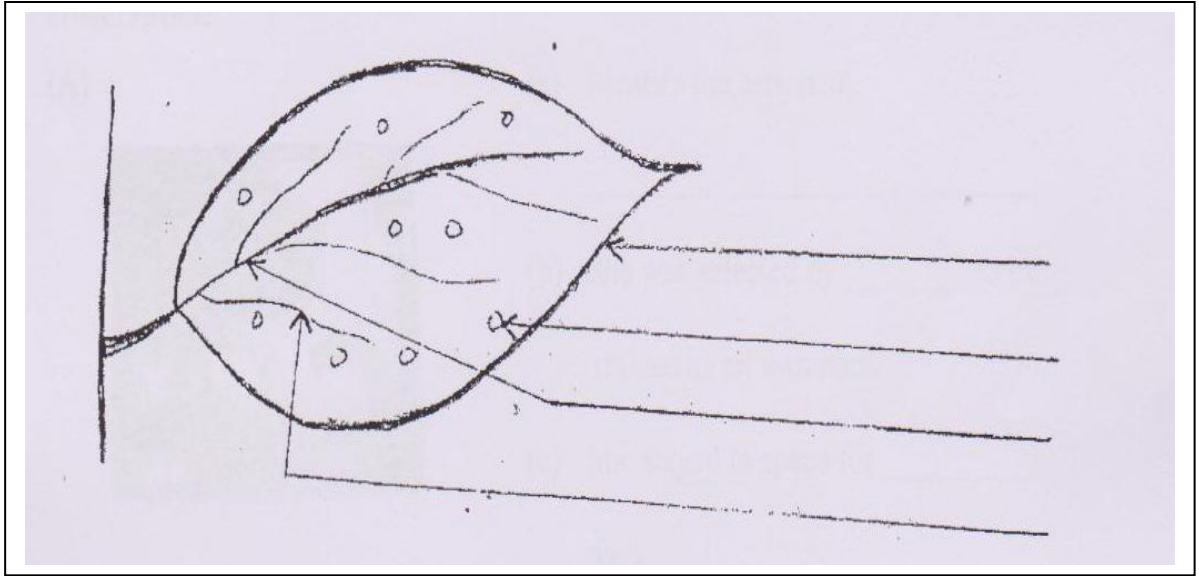
---

---

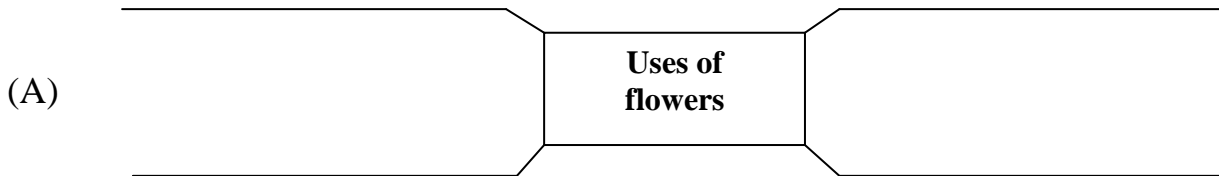
---

---

**X (i) Label the diagram.**



**(ii) Complete the web charts**



**XI Draw and label the following diagrams.**

A. A flower

B. Any four sense organs along with their names.