



DELHI PUBLIC SCHOOL, GWALIOR
MODEL TEST PAPER
CLASS – II
SUBJECT: ENVIRONMENTAL STUDIES


Name..... Sec..... Roll no..... Date.....

I. Identify the given pictures and name them.

1.



2.



©Lal Perera * illustrationsOf.com/228075

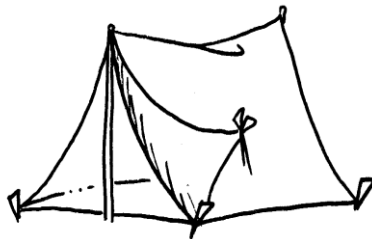
3.



4.



5.



II. Fill in the blanks:

1. _____ is an internal organ.
2. _____ covers our body.
3. We are born as _____.
4. _____ and their children make a family.
5. We wear _____ clothes in winter.

III. Tick (✓) the correct answer:


1. We get wool from -
(a) dog (b) sheep (c) lion
2. He paints our house -
(a) painter (b) doctor (c) plumber
3. We should cross the road at -
(a) cow crossing (b) zebra crossing (c) horse crossing
4. It is called the master organ of our body -
(a) heart (b) lungs (c) brain
5. When we grow old, our hair turns -
(a) blue (b) red (c) grey

IV. 'True' or 'False'.

1. There are two lungs in our body. _____
2. A boy grows to become a woman. _____
3. We wear cotton clothes in summer. _____
4. A first-aid box has medicines, bandages and tools. _____
5. A mason lays bricks and cement to build a wall. _____

V. Match the following:

1.



Land transport

2.




Air transport

3.



Fastest means of land transport

4.



Christmas

5.



Water transport

VI. Give one word for the following.

1. The place where the food is cooked - _____
2. The task that you have to do regularly - _____
3. It helps us to digest our food - _____
4. It helps us to feel - _____
5. A girl grows to become a - _____

VII. Answer the following questions.

Q.1 What happens as we grow older?

Ans. _____

Q.2 What is a nuclear family?

Ans. _____

Q.3 What is safety?

Ans. _____

Q.4 What is a balanced diet?

Ans. _____

Q.5 Why do we all need a house?

Ans. _____

VIII. Name the following.

1. any 2 permanent houses -
(a) _____ (b) _____
2. any 2 types of shelters -
(a) _____ (b) _____
3. any 2 helpers of our society -
(a) _____ (b) _____

4. any 2 natural fibres -

(a) _____


(b) _____

5. any 2 external organs -


(a) _____

(b) _____

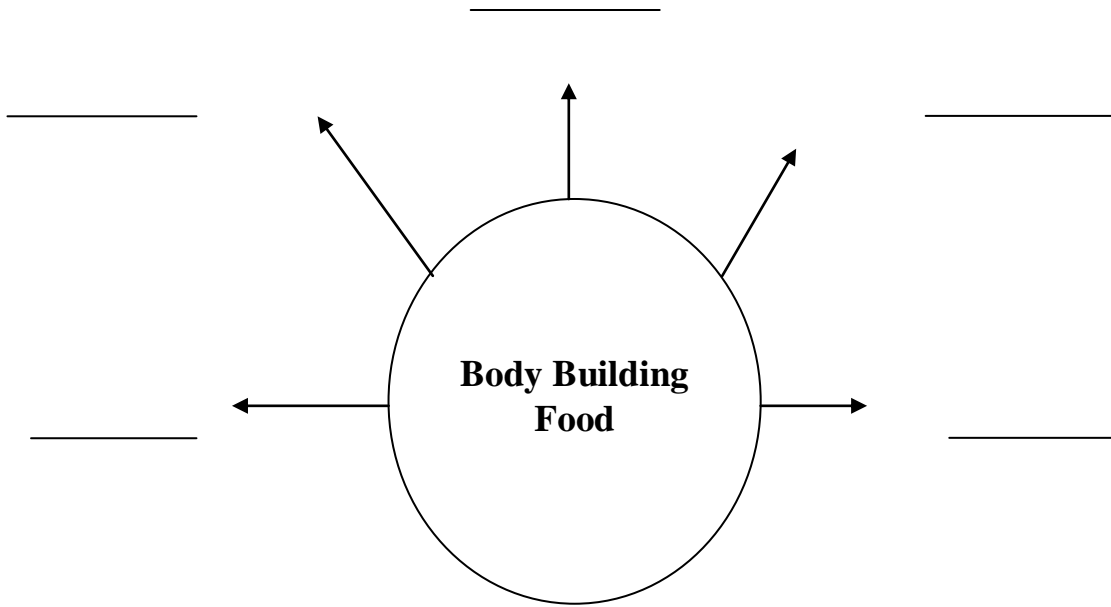
IX. A. Draw name and colour any 2 parts of our body.



B. Draw and colour a Pucca house.



X.A. Label the following web chart.



B. Label the following web chart.

