



DELHI PUBLIC SCHOOL, GWALIOR
MODEL TEST PAPER
CLASS – II
SUBJECT: COMPUTER

Name.....Sec..... Roll no.....Date.....

I. Tick (✓) the correct option.

1. _____ is the brain of the computer.

- (a) Mouse (b) Keyboard (c) CPU

2. Save option is present in _____.

- (a) toolbar (b) desktop (c) file menu

3. Wordpad/Notepad is an _____ of Windows Operating System.

- (a) icon (b) button (c) application

4. To open a saved drawing you use _____ option of file menu.

- (a) new (b) save (c) open

II. Fill in the blanks.

[cursor , ellipse , power , capslock]

1. Press the _____ button to start the computer.
2. To draw a circle _____ tool is used.
3. Capital letter can be typed by using _____ key.
4. Mouse is used to move the _____ on the screen.

III. Write 'True' or 'False'.

1. There are 28 alphabet keys on the keyboard. _____
2. Computer makes our work easy. _____
3. Delete key allows us to move to the next line. _____
4. 'Switch on the U.P.S.' is the first step to start the computer. _____

IV. Match the following.

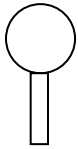
A

B

1. Line tool

Magnifying Tool

- 2.



Spacebar

3. Airbrush

Used to draw a straight line

4. Longest key

Spray colour

V. Answer the following questions.

Q.1 What is a Toolbox?

Ans. _____

Q.2 Name the different types of computer.

Ans. _____

Q.3 Write the steps to start MS-Paint.

Ans. _____

Q.4 What is a Cursor?

Ans. _____

VI. Find the missing letters.

- | | |
|-----------------------------|------------------------------|
| 1. K ____ Y B ____ ____ R D | 2. M ____ ____ I T ____ R |
| 3. D ____ S K T ____ P | 4. P ____ L ____ T ____ P |
| 5. T ____ B ____ E T | 6. P ____ I ____ T ____ ____ |

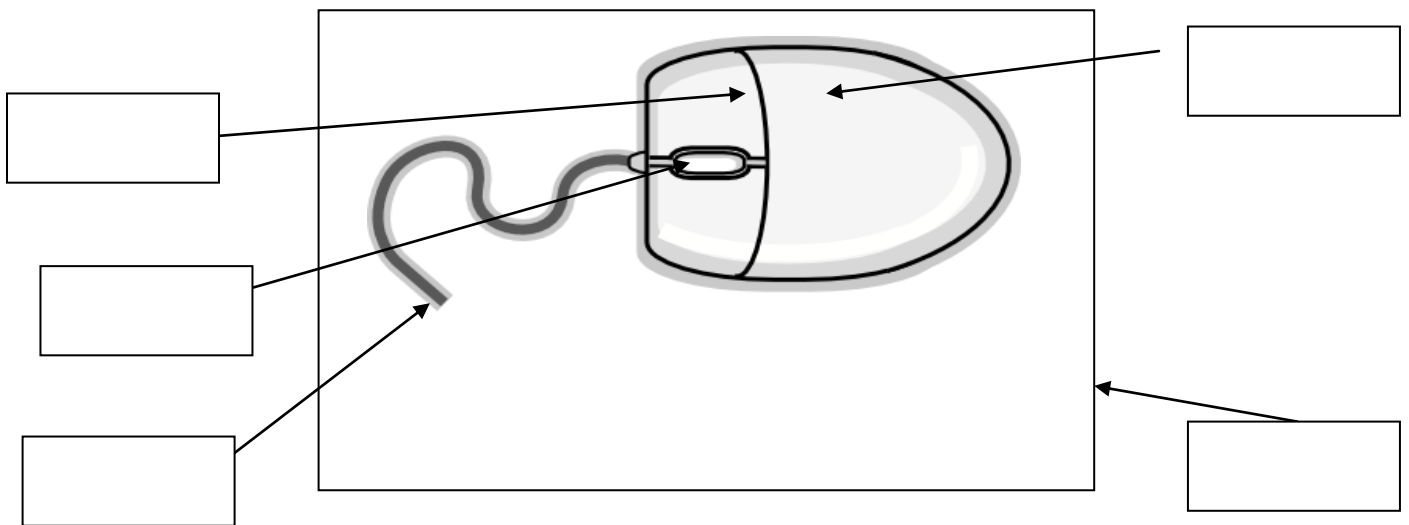
VII. Write the full form of the following.

1. ALU : _____
2. CD : _____
3. CPU : _____
4. DVD : _____
5. WWW : _____

VIII. Answer in one word.

1. Name the keys that helps us to write sentences. _____
2. Name the key that helps to move the cursor down. _____
3. On which part of the Notepad window are the minimize, maximize and close buttons are present. _____
4. Name the device that gives power to computer. _____
5. Name the device that helps to capture live images. _____


IX. Label the diagram.



Helpbox - left button , right button , scroll wheel , mouse pad , wire

X. Draw and colour.

(a) Any one tool of MS-Paint



(b) Any one key of keyboard

