

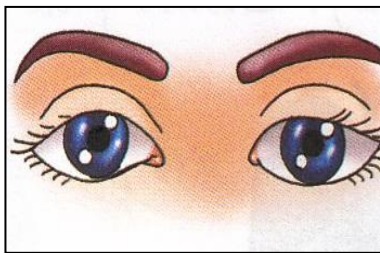


**DELHI PUBLIC SCHOOL, GWALIOR**  
**MODEL TEST PAPER**  
**CLASS – I**  
**SUBJECT: ENVIRONMENTAL STUDIES**

Name..... Sec..... Roll no..... Date.....

**I. Identify the pictures and name them.**

1.



\_\_\_\_\_

2.



\_\_\_\_\_

3.



\_\_\_\_\_

4.



\_\_\_\_\_

5.





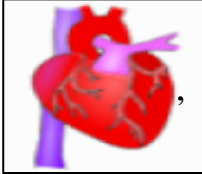


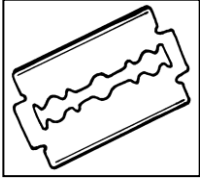














\_\_\_\_\_

**II. Fill in the blanks.**

stories , big , danger , uniform , waste

1. A joint family is a \_\_\_\_\_ family.
2. The school children wear \_\_\_\_\_.
3. Do not \_\_\_\_\_ food.
4. Grandfather tells me \_\_\_\_\_.
5. Safety means not being in \_\_\_\_\_.

**III. Circle the odd one.**

1.		,		,		,	
2.		,		,		,	
3.		,		,		,	
4.		,		,		,	
5.		,		,		,	

**IV. 'True' or 'False'.**

1. We wear woollen clothes in summer. \_\_\_\_\_
2. Parents and their children make a family. \_\_\_\_\_
3. We taste with the help of our tongue. \_\_\_\_\_
4. We use soft cotton buds to clean our ears. \_\_\_\_\_
5. Playing rough games is safe. \_\_\_\_\_

**V. Match the following.**

1.



taste

2.



wool

3.



winter season

4.



good habit

5.



pucca house

**VI. Give one word for the following.**

- 1. The sense organ which helps us to see - \_\_\_\_\_
- 2. The place where the food is cooked - \_\_\_\_\_
- 3. The place where we sleep - \_\_\_\_\_
- 4. The animal which gives us wool - \_\_\_\_\_
- 5. A family that has 1 or 2 children - \_\_\_\_\_

**VII. Answer the following questions.**

Q.1 What is a nuclear family?

Ans. \_\_\_\_\_  
\_\_\_\_\_

Q.2 Which sense organ helps us to feel?

Ans. \_\_\_\_\_  
\_\_\_\_\_

Q.3 Why do we wear clothes?

Ans. \_\_\_\_\_  
\_\_\_\_\_

Q.4 What makes our bones and teeth strong?

Ans. \_\_\_\_\_  
\_\_\_\_\_

Q.5 Why do we need a house?

Ans. \_\_\_\_\_  
\_\_\_\_\_

**VIII. Name the following.**

1. Name any 2 parts of a body -

(a) \_\_\_\_\_

(b) \_\_\_\_\_

2. Name any 2 milk products -

(a) \_\_\_\_\_

(b) \_\_\_\_\_

3. Name any 2 cloth material -

(a) \_\_\_\_\_

(b) \_\_\_\_\_

4. Name any 2 types of houses -

(a) \_\_\_\_\_


(b) \_\_\_\_\_

5. Name any 2 exercises -


(a) \_\_\_\_\_

(b) \_\_\_\_\_

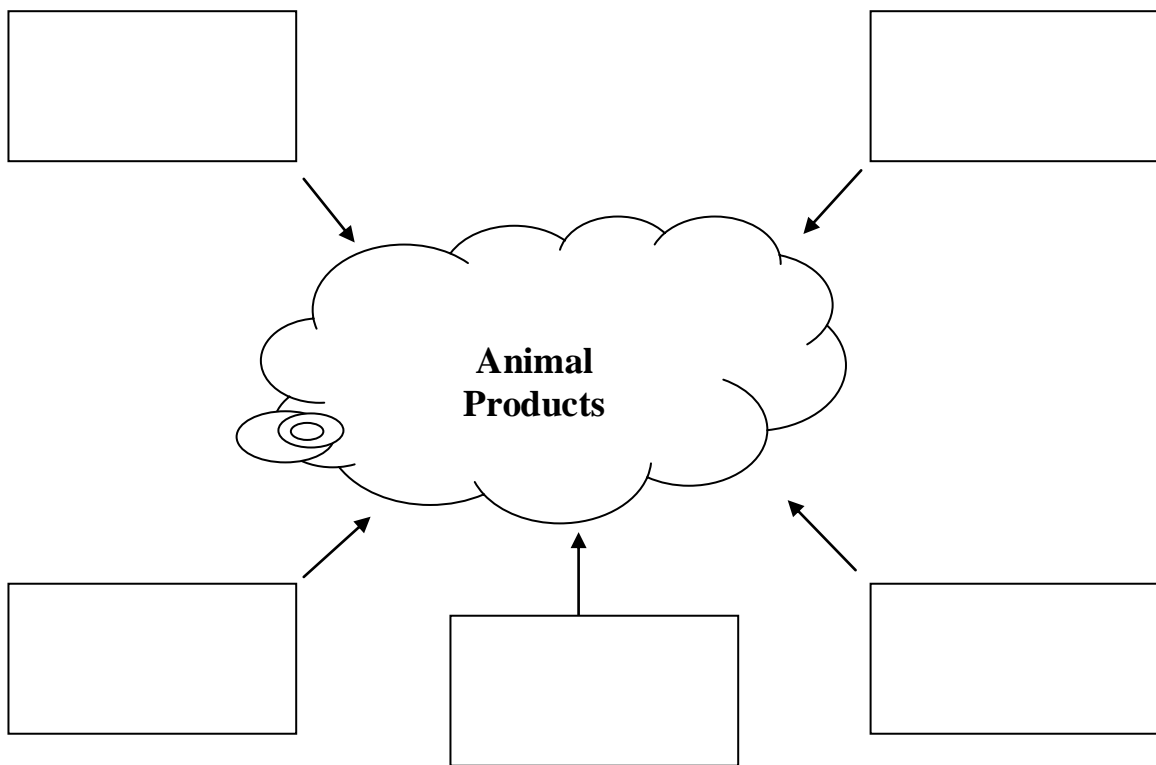
**IX.A. Draw, name and colour the traffic light.**



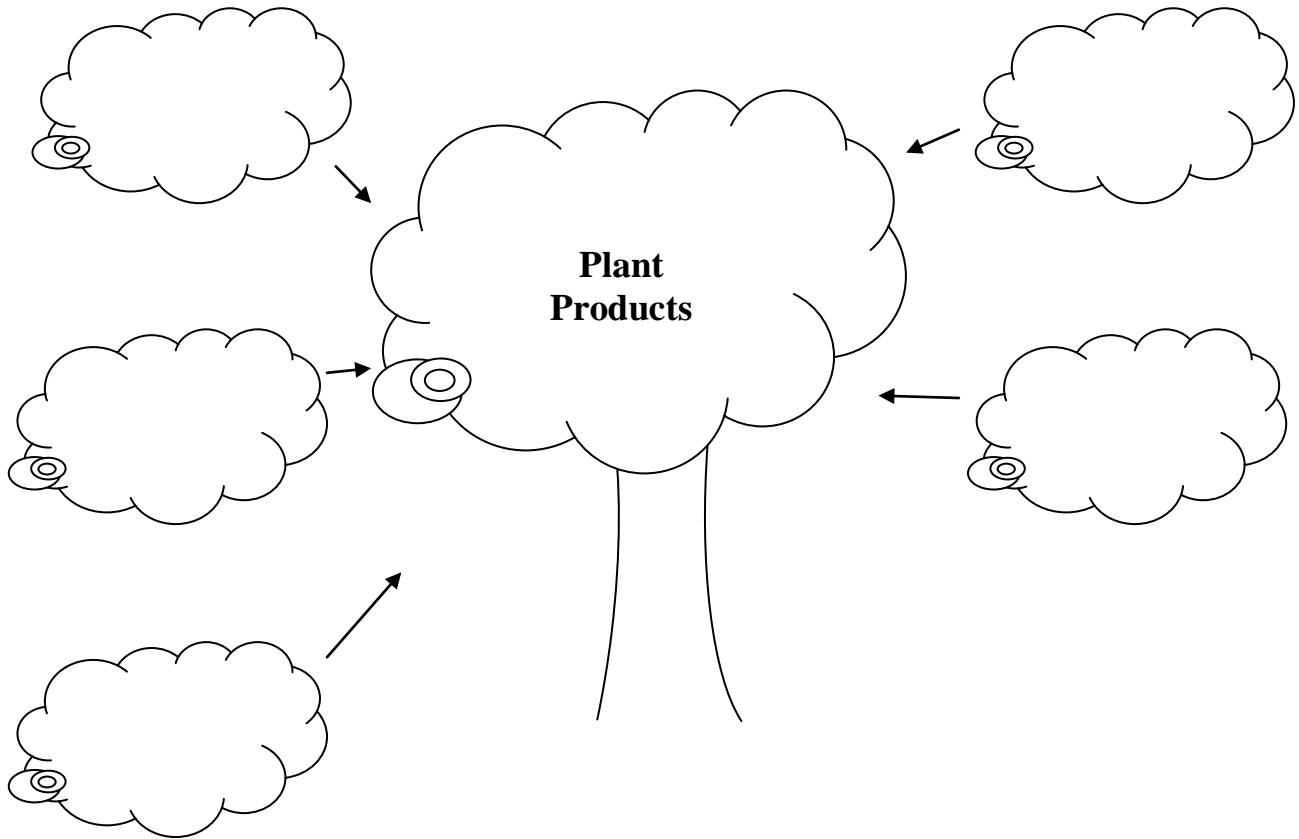
**B. Draw and colour a kuchcha house.**



**X.A. Label the following.**



**B. Label the following.**



-----X-----