



Global Cyber Olympiad

CLASS 3rd SYLLABUS & SAMPLE QUESTIONS

❖ Generations of Computers ❖ History of Computing Hardware ❖ Booting Process ❖ Input and Output devices ❖ Types of Software ❖ Memory Management in computer ❖ Operating System (OS) ❖ Getting Start with Paint Brush ❖ Working with Notepad ❖ Better Ways of Using Computers

The Actual Question Paper Contains 47 Questions. The Duration of the Test Paper is 67 Minutes.

1. Consider the following figure:



(i)



(ii)



(iii)



(iv)





Which one of the following is/are the input device(s)?

- (A) Both (i) and (ii)
- (B) (i), (ii) and (iii)
- (C) (i), (ii) and (iv)
- (D) All of above
- (E) None of these

2. Match the following:

A

B

- | | |
|--|------------------|
| 1.  | i. Straight line |
| 2.  | ii. Polygon |
| 3.  | iii. Eraser |
| 4.  | iv. Ellipse |

- (A) 1->iv, 2->iii, 3->ii, 4->i
- (B) 1->iii, 2->ii, 3->i, 4->iv

- (C) 1->ii, 2->iii, 3->iv, 4->i
- (D) 1->i, 2->iii, 3->iv, 4->ii
- (E) 1->ii, 2->iii, 3->i, 4->iv

3. What +, -, *, and / are called?

- (A) Logical operator
- (B) Sequential operator
- (C) Arithmetic operator
- (D) All of these
- (E) None of these

4. Given below are the statements about mouse and icon. Select the correct statement.

1. If you want to see the contents of a particular disk, place the pointer on it and single click it.
 2. For opening any files/disk, we must double click on it.
 3. Icon represent only Files not Folders.
- (A) 1 and 3
 - (B) Only 2
 - (C) 1 and 2
 - (D) All of these
 - (E) None of these

5. In which one of the following generations of computers the technology of integrated circuits was introduced?

- (A) 1st Generation
- (B) IInd Generation
- (C) IIIrd Generation
- (D) IVth Generation
- (E) None of these



6. In MS-Paint, Right click the mouse on color box to :

- (A) Change the file name
- (B) Change the background color
- (C) Change the foreground color
- (D) Right click has no use in MS-Paint
- (E) None of these

7. In Windows, the first screen we see, after booting up the computer, is called :

- (A) Background Screen
- (B) Desktop
- (C) Wallpaper
- (D) Home Page
- (E) None of these

8. Michael feeds the data and instructions into the computer with the help of certain devices. What kind of device he uses for this action?

- (A) Input device
- (B) Output device
- (C) Controller device
- (D) Regulating device
- (E) None of these

9. What is the full form of CPU?

- (A) Control Processing Unit
- (B) Central Power Unit
- (C) Central Processing Unit
- (D) Command Processing Unit
- (E) None of these

10. To get \$ sign, you should press :

- (A) Shift + 3
- (B) Shift + 4
- (C) Shift + 5
- (D) Shift + 6
- (E) None of these

11. One digit in computer system is called:

- (A) Bit
- (B) Byte
- (C) Sub bit
- (D) Nibble
- (E) None of these

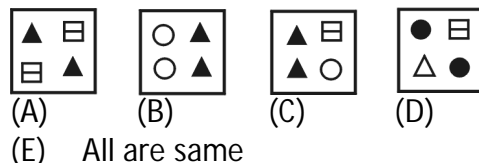
12. Fill in the Blanks:

1. ___ is a text based input device that allows the user to interact with the computer.
 2. The _____ is a small device used to point to a particular place on the screen.
 3. A _____ is an input device consisting of a large pointed stick and input buttons on it.
- (A) Joystick, mouse and keyboard
 - (B) Joystick, keyboard and mouse
 - (C) Keyboard, joystick and mouse
 - (D) Keyboard, mouse and joystick
 - (E) None of these

13. The process of starting a Computer is called Booting. What is cold Booting?

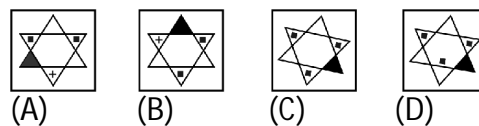
- (A) Start the computer first time by main switch
- (B) Restart the computer by Ctrl + Alt + Del keys
- (C) Switch on the button on the monitor
- (D) Switch on the power switch on CPU
- (E) None of these

14. Find out which figure is different from other three.



- (A)
- (B)
- (C)
- (D)
- (E) All are same

15. Find out which figure is different from other three.



- (A)
- (B)
- (C)
- (D)
- (E) All are same

ANSWERS															
1.	C	2.	C	3.	C	4.	B	5.	C	6.	B	7.	B	8.	A
9.	C	10.	B	11.	B	12.	D	13.	D	14.	D	15.	D		