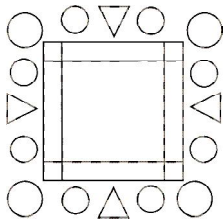




# Global Math Olympiad

## CLASS : 1 (SYLLABUS & SAMPLE QUESTIONS)

Skip Counting, Back and Forth Counting, Ones, Tens and Hundreds, Addition, Subtraction, Comparison  
Time and Calendar, Money, Identification of Geometrical Figures, Number Series, Measurement  
Knowing Patterns, Applied Mathematics



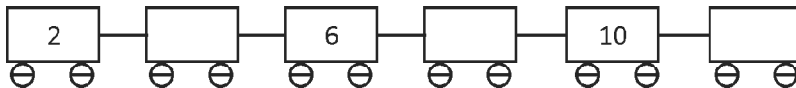
- (A) 8                      (B) 10                      (C) 11                      (D) 12

2. Put the correct sign in the box.

$4 + 5$    $3 + 7$

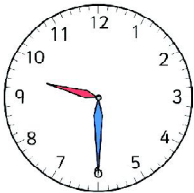
- (A) >                      (B) <                      (C) =                      (D) None of these

3. Fill in the boxes by counting 2.



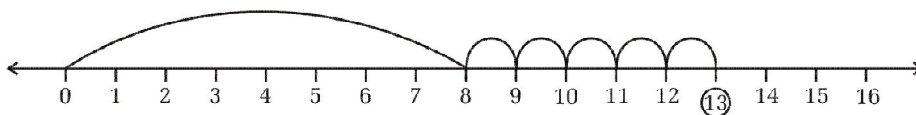
- (A) 3, 7, 9                      (B) 4, 8, 11                      (C) 1, 5, 6                      (D) 4, 8, 12

4. What time can you see on the Clock?



- (A) 10:00                      (B) 09:30                      (C) 07:30                      (D) 06:30

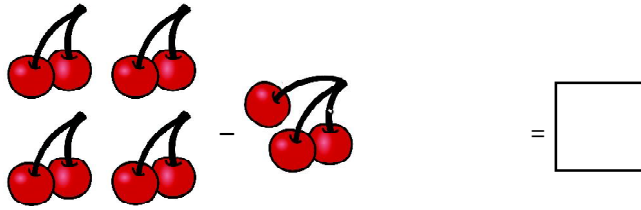
5. Which one of the following numbers will come before the circled number?



- (A) 12                      (B) 11                      (C) 10                      (D) 9




6. There are eight cherries, Steve takes three cherries. How many cherries are left?



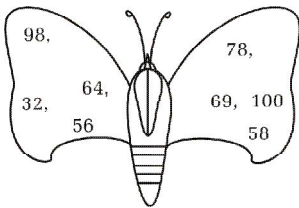
- (A) 8                      (B) 5                      (C) 4                      (D) 6

7. Fill the numbers and climb up ladder.



- (A) 4, 5, 6, 7            (B) 7, 6, 5, 4            (C) 6, 7, 8, 9            (D) 1, 2, 3, 4


8. Which is the largest numbers in given numbers?



- (A) 98                      (B) 78                      (C) 100                      (D) 64

9. Given below the cost of different things:

Nancy goes to market and buy pop corn. How many coins she gave to shopkeeper?



Nancy goes to market and buys pop corn. Which one of the following options shows the money she gives to the shopkeeper?



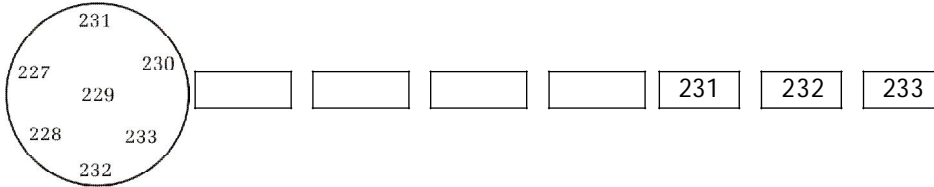


(C)



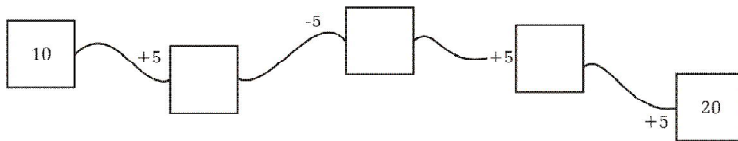
(D)

10. Arrange the number given in the circle in increasing order.



- (A) 227, 228, 229, 230                      (B) 230, 229, 228, 227  
 (C) 228, 230, 232, 331                      (D) 100, 200, 300, 400

11. Fill the box by adding or subtracting the numbers.



- (A) 15, 20, 35      (B) 10, 15, 20      (C) 15, 10, 15      (D) 20, 25, 35

12. Steve takes breakfast at 8 AM and lunch at 2 PM. After how many hours of breakfast he takes lunch?

- (A) 2 hours      (B) 6 hours      (C) 8 hours      (D) 4 hours

13. Sunday comes after Saturday. Monday comes after Sunday Friday comes before Saturday. Name the day which comes before Friday.

- (A) Thursday      (B) Monday      (C) Friday      (D) Tuesday

14. Take a number 10 and add 5 to it, then subtract 6 from the sum. What is the resulting number?

- (A) 5      (B) 7      (C) 9      (D) 6

15. Which number will come in the blank box?

6	24	42
12	30	
18	36	54

- (A) 60      (B) 47      (C) 49      (D) 48

**ANSWERS**

1. (D) 2. (B) 3. (D) 4. (B) 5. (A) 6. (B) 7. (A) 8. (C)  
 9. (C) 10. (A) 11. (C) 12. (B) 13. (A) 14. (C) 15. (D)