

# INTERNATIONAL TALENT HUNT OLYMPIAD 2014



**iTHO**

Organized by :

**Society of Science  
Education**

New Delhi, India

FOR SUPREMACY IN SCIENCE & MATHEMATICS

www.silverzone.org



Class 2nd

Syllabus & Sample Questions

Living and Non-living things, Plants and animals around us, Knowing our body, Air, Water and Weather, Food, Clothes and Shelter, Means of transport, Heavenly bodies, Number system, Addition and Subtraction, Multiplication and Division, Time, Money, Shapes around us, Fractions, General Awareness.

*The actual question paper contains 30 questions. The duration of the test paper is 60 minutes.*

1. Find the odd one out.



(A)  Bun



(B)  Egg



(C)  Cold drink



(D)  Bread

2. Identify the cauliflower from the following choices.



(A)



(B)



(C)



(D)

3. Which one of the following is used to make juice?



(A)  Beans



(B)  Maize



(C)  Orange

(D)  None of these

4. Which one of the following clothes is essential for winter?



(A)  Jacket



(B)  T-shirt



(C)  Shirt



(D)  Frock

5. Which one of the following parts of a plant supports it to stand on the soil ?

(A)  Stem

(B)  Leaves

(C)  Fruits

(D)  All of these

6. How many groups will be formed of the following pencils, if we keep four(4) pencils in each group?



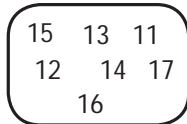
- (A)  3                      (B)  5                      (C)  2                      (D)  6

7. Which one of the following is a plant product?



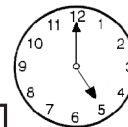


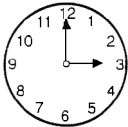
- (A)  Banana                      (B)  Car                      (C)  Television                      (D)  Milk

8. Which of the following numbers will come after 15 when numbers inside the box given below are counted in forth counting order?



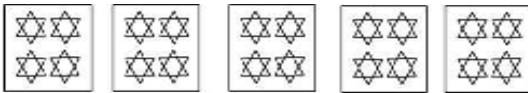
- (A)  16 & 17                      (B)  12 & 13                      (C)  13 & 14                      (D)  Only 11

9. Which one of the following clocks shows the time 5 O' clock?



- (A)                       (B)                       (C)                       (D)

10. Which one of the following options represents the figure correctly?



- (A)   $10 \times 2 = 20$                       (B)   $4 \times 5 = 20$   
 (C)   $5 \times 5 = 25$                       (D)   $5 \times 3 = 15$

11. To ask the name of a person we say \_\_\_\_\_.

- (A)  Tell me your name please.  
 (B)  Should I know your name please.  
 (C)  May I know your good name please.  
 (D)  None of these

12. We say \_\_\_\_\_ I help you, to offer help to others.

- (A)  Can                      (B)  May                      (C)  Should                      (D)  Will

## Answers

- |        |        |        |         |         |         |
|--------|--------|--------|---------|---------|---------|
| 1. (C) | 2. (C) | 3. (C) | 4. (A)  | 5. (A)  | 6. (A)  |
| 7. (A) | 8. (A) | 9. (D) | 10. (B) | 11. (C) | 12. (B) |